

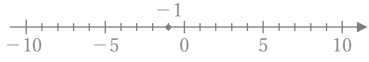
正負の数の加法

年 組 名前

/30

■ 次のたし算をなさい。

① $(-1) + (-3) =$



② $(-3) + (+9) =$



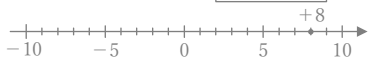
③ $(+3) + (-8) =$



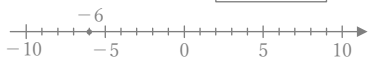
④ $(-4) + (-5) =$



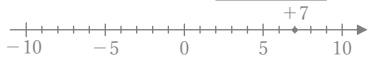
⑤ $(+8) + (-9) =$



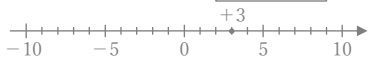
⑥ $(-6) + (+8) =$



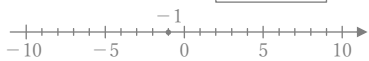
⑦ $(+7) + (-9) =$



⑧ $(+3) + (-5) =$



⑨ $(-1) + (+9) =$



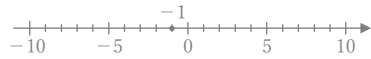
⑩ $(-3) + (+4) =$



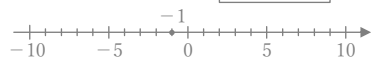
⑪ $(+4) + (-5) =$



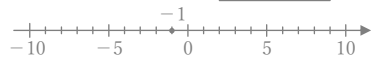
⑫ $(-1) + (-5) =$



⑬ $(-1) + (-2) =$



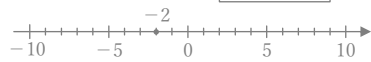
⑭ $(-1) + (+3) =$



⑮ $(+4) + (-9) =$



⑯ $(-2) + (-6) =$



⑰ $(+3) + (-6) =$



⑱ $(+4) + (-6) =$



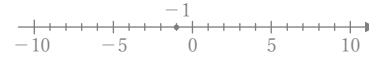
⑲ $(-1) + (+2) =$



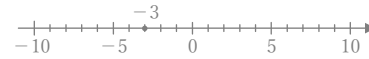
⑳ $(-1) + (-8) =$



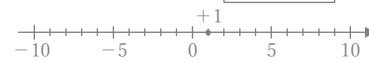
㉑ $(-1) + (+6) =$



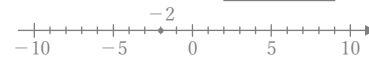
㉒ $(-3) + (-5) =$



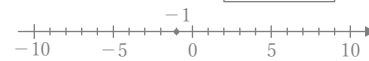
㉓ $(+1) + (-5) =$



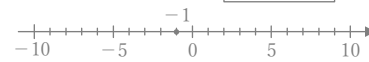
㉔ $(-2) + (+9) =$



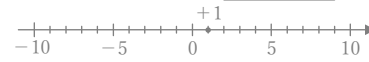
㉕ $(-1) + (-1) =$



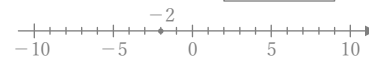
㉖ $(-1) + (-4) =$



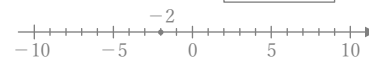
㉗ $(+1) + (-4) =$



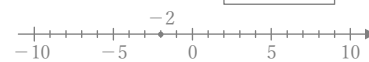
㉘ $(-2) + (+5) =$



㉙ $(-2) + (-4) =$



㉚ $(-2) + (+4) =$



正負の数の加法

年 組 名前

/30

■ 次のたし算をなさい。

