

正負の数の加法

年 組 名前

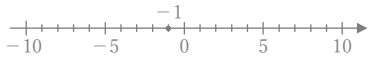
/30

■ 次のたし算をしなさい。

① $(-2) + (-6) =$



② $(-1) + (+6) =$



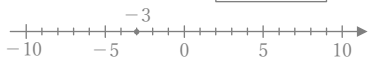
③ $(+6) + (-7) =$



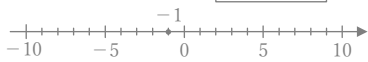
④ $(-4) + (+6) =$



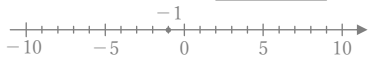
⑤ $(-3) + (-4) =$



⑥ $(-1) + (-4) =$



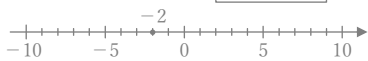
⑦ $(-1) + (-8) =$



⑧ $(-6) + (+9) =$



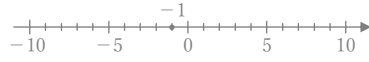
⑨ $(-2) + (+8) =$



⑩ $(-2) + (+7) =$



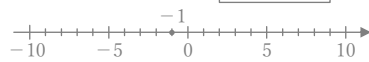
⑪ $(-1) + (+3) =$



⑫ $(+5) + (-8) =$



⑬ $(-1) + (-5) =$



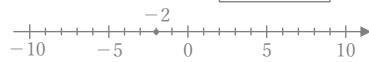
⑭ $(-4) + (+5) =$



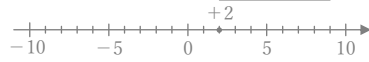
⑮ $(-4) + (+8) =$



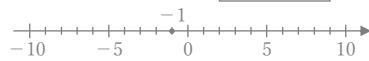
⑯ $(-2) + (-7) =$



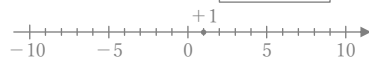
⑰ $(+2) + (-3) =$



⑱ $(-1) + (-6) =$



⑲ $(+1) + (-7) =$



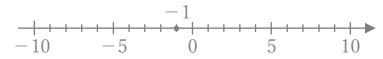
⑳ $(+8) + (-9) =$



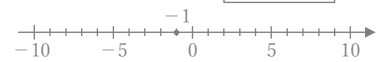
㉑ $(-3) + (-6) =$



㉒ $(-1) + (-7) =$



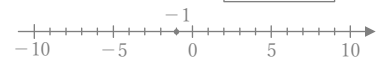
㉓ $(-1) + (-3) =$



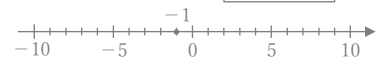
㉔ $(+7) + (-9) =$



㉕ $(-1) + (+8) =$



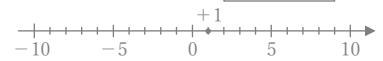
㉖ $(-1) + (+9) =$



㉗ $(+3) + (-6) =$



㉘ $(+1) + (-5) =$



㉙ $(+5) + (-6) =$



㉚ $(+2) + (-5) =$



正負の数の加法

年 組 名前

/30

■ 次のたし算をしなさい。

