


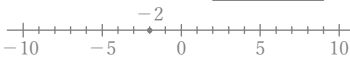
正負の数の加法

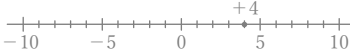
年 組 名前


/30

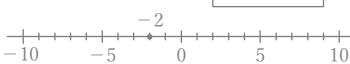
■ 次のたし算をしなさい。

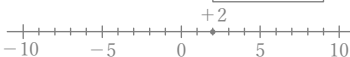
① $(+3) + (-5) =$



② $(-2) + (-6) =$


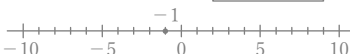
③ $(+4) + (-9) =$



④ $(+4) + (-8) =$



⑤ $(-2) + (+5) =$



⑥ $(+2) + (-7) =$


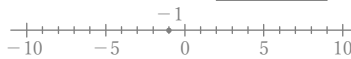
⑦ $(-6) + (+7) =$


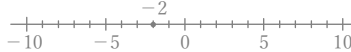
⑧ $(-1) + (-5) =$



⑨ $(-5) + (+9) =$



⑩ $(-3) + (+7) =$



⑪ $(-4) + (-5) =$



⑫ $(-1) + (-2) =$


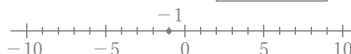
⑬ $(-2) + (-2) =$


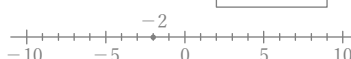
⑭ $(-1) + (-3) =$


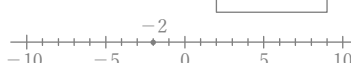
⑮ $(+7) + (-9) =$


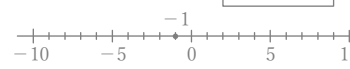
⑯ $(+1) + (-3) =$


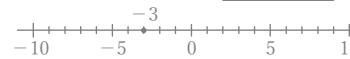
⑰ $(+2) + (-3) =$


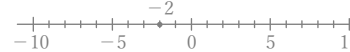
⑱ $(-1) + (+6) =$


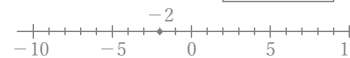
⑲ $(-2) + (-5) =$


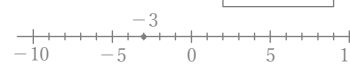
⑳ $(-2) + (+8) =$



㉑ $(-1) + (-1) =$



㉒ $(-3) + (+8) =$


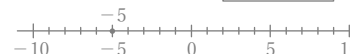
㉓ $(-2) + (-3) =$



㉔ $(-2) + (+4) =$



㉕ $(-3) + (-3) =$


㉖ $(-5) + (+8) =$


㉗ $(+3) + (-6) =$


㉘ $(-5) + (+6) =$


㉙ $(+3) + (-9) =$



㉚ $(+8) + (-9) =$



正負の数の加法


年 組 名前


/30

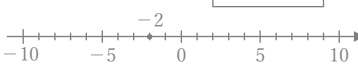
■ 次のたし算をなさい。


① $(+3) + (-5) = \boxed{-2}$



② $(-2) + (-6) = \boxed{-8}$


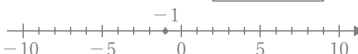
③ $(+4) + (-9) = \boxed{-5}$


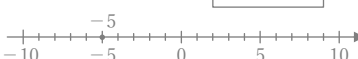
④ $(+4) + (-8) = \boxed{-4}$



⑤ $(-2) + (+5) = \boxed{+3}$



⑥ $(+2) + (-7) = \boxed{-5}$


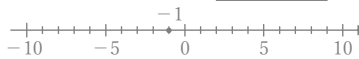
⑦ $(-6) + (+7) = \boxed{+1}$


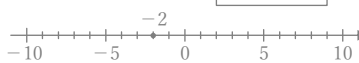
⑧ $(-1) + (-5) = \boxed{-6}$


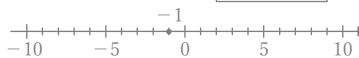
⑨ $(-5) + (+9) = \boxed{+4}$



⑩ $(-3) + (+7) = \boxed{+4}$


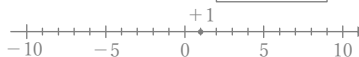
⑪ $(-4) + (-5) = \boxed{-9}$



⑫ $(-1) + (-2) = \boxed{-3}$


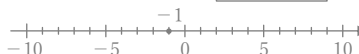
⑬ $(-2) + (-2) = \boxed{-4}$


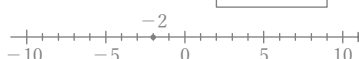
⑭ $(-1) + (-3) = \boxed{-4}$


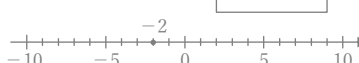
⑮ $(+7) + (-9) = \boxed{-2}$


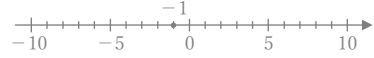
⑯ $(+1) + (-3) = \boxed{-2}$



⑰ $(+2) + (-3) = \boxed{-1}$


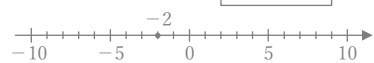
⑱ $(-1) + (+6) = \boxed{+5}$



⑲ $(-2) + (-5) = \boxed{-7}$



⑳ $(-2) + (+8) = \boxed{+6}$



㉑ $(-1) + (-1) = \boxed{-2}$



㉒ $(-3) + (+8) = \boxed{+5}$


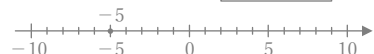
㉓ $(-2) + (-3) = \boxed{-5}$


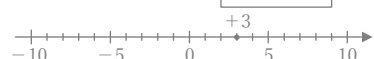
㉔ $(-2) + (+4) = \boxed{+2}$


㉕ $(-3) + (-3) = \boxed{-6}$


㉖ $(-5) + (+8) = \boxed{+3}$


㉗ $(+3) + (-6) = \boxed{-3}$


㉘ $(-5) + (+6) = \boxed{+1}$


㉙ $(+3) + (-9) = \boxed{-6}$


㉚ $(+8) + (-9) = \boxed{-1}$
