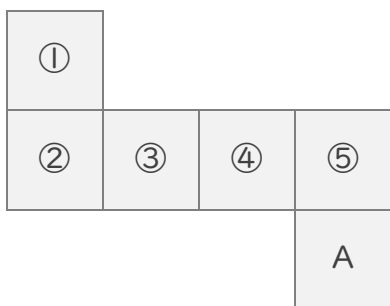
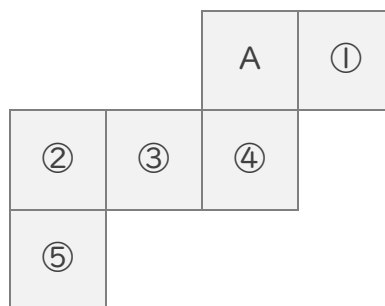


■ 次の立方体のてん開図を組み立てたときに、A の面のむかい(反対側)の面の番号を答えましょう。

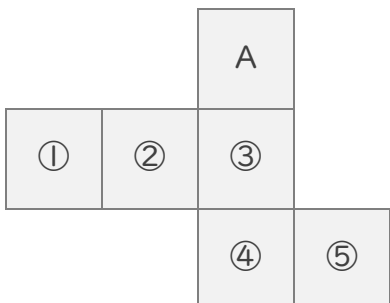
(1)



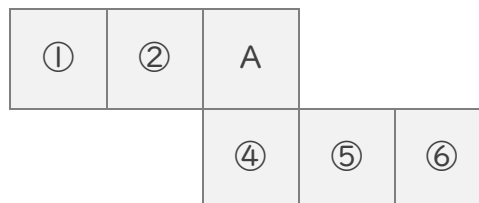

(2)



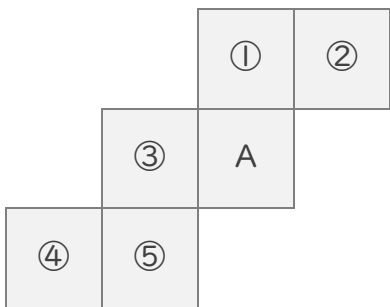

(3)



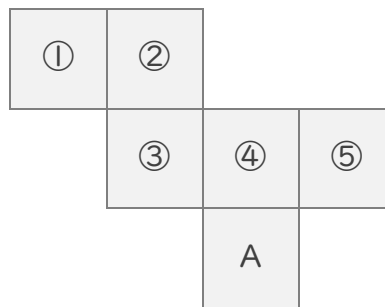

(4)



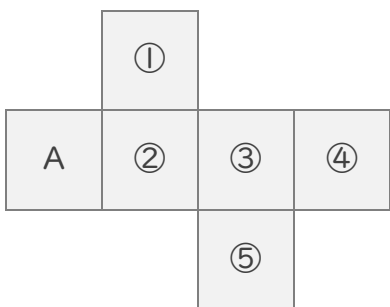

(5)



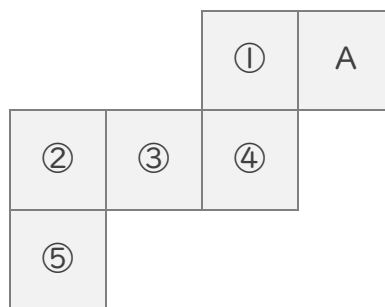

(6)




(7)




(8)



■ 次の立方体のてん開図を組み立てたときに、A の面のむかい(反対側)の面の番号を答えましょう。

(1)

(2)

(3)

(4)

(5)

(6)

(7)

(8)