

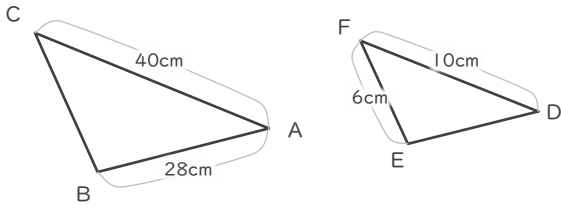
縮図

年 組 名前

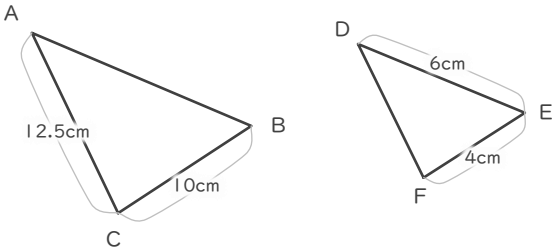
/ 6

■ 三角形DEFは三角形ABCの縮図です。それぞれ何分の何の縮図でしょう。

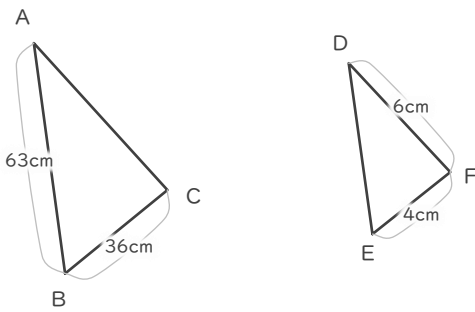
①



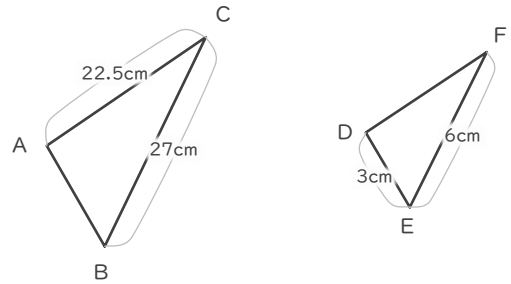
②



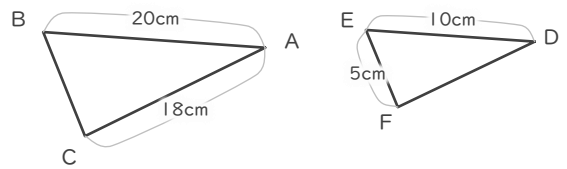
③



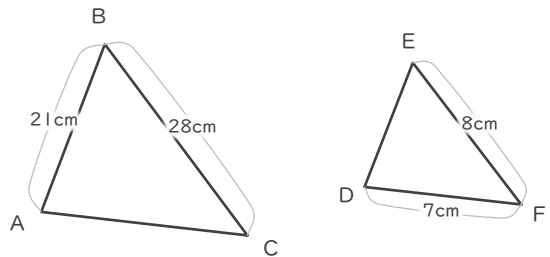
④



⑤



⑥



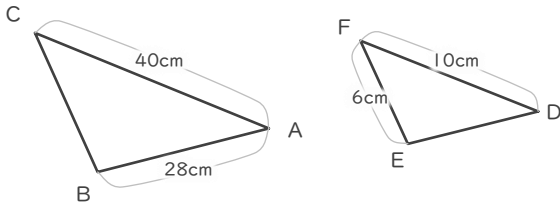
縮図

年 組 名前

/ 6

■ 三角形DEFは三角形ABCの縮図です。それぞれ何分の何の縮図でしょう。

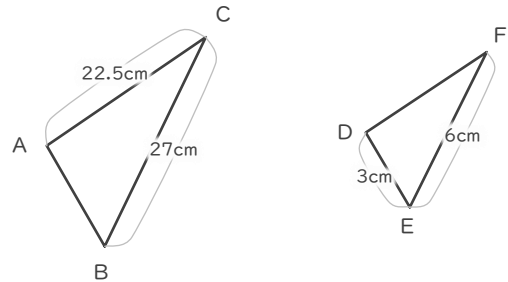
①



$$10 \div 40 = \frac{1}{4}$$

$$\frac{1}{4}$$

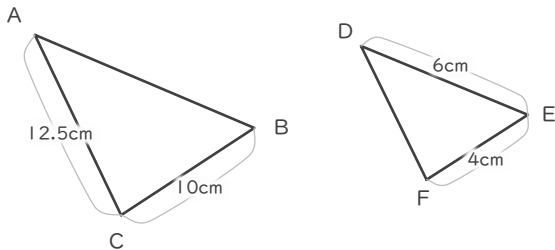
④



$$6 \div 27 = \frac{2}{9}$$

$$\frac{2}{9}$$

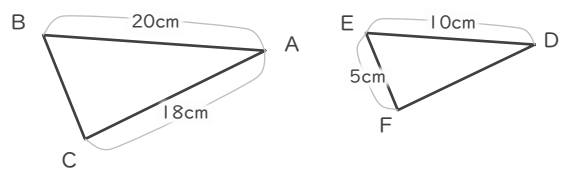
②



$$4 \div 10 = \frac{2}{5}$$

$$\frac{2}{5}$$

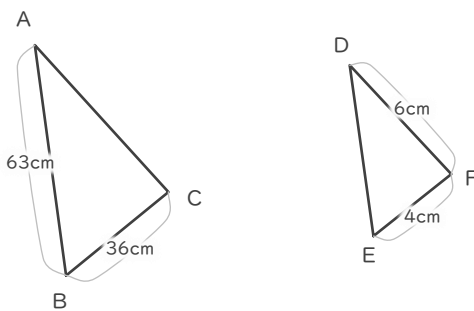
⑤



$$10 \div 20 = \frac{1}{2}$$

$$\frac{1}{2}$$

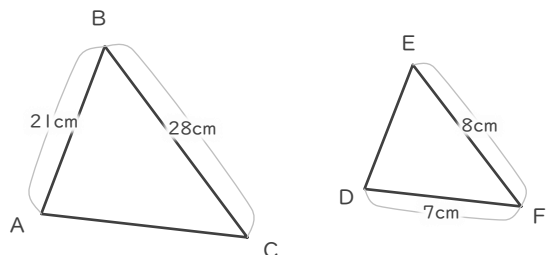
③



$$4 \div 36 = \frac{1}{9}$$

$$\frac{1}{9}$$

⑥



$$8 \div 28 = \frac{2}{7}$$

$$\frac{2}{7}$$