

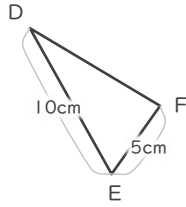
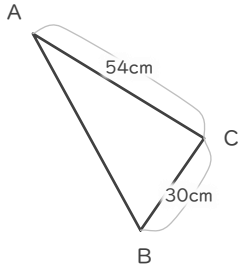
縮図

年 組 名前

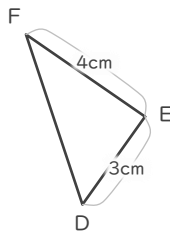
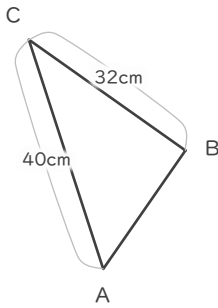
/ 6

■ 三角形DEFは三角形ABCの縮図です。それぞれ何分の何の縮図でしょう。

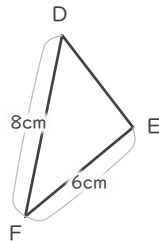
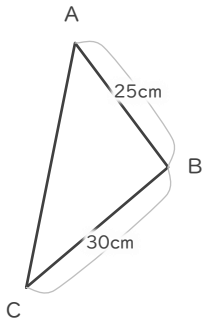
①



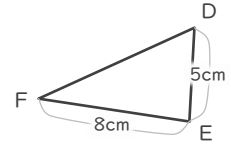
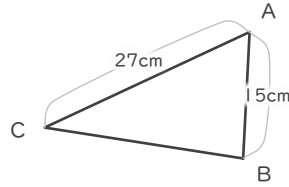
②



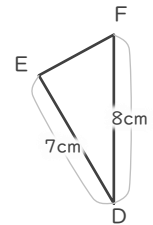
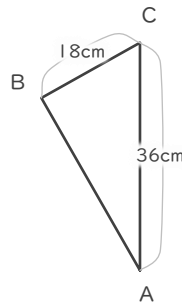
③



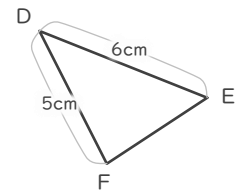
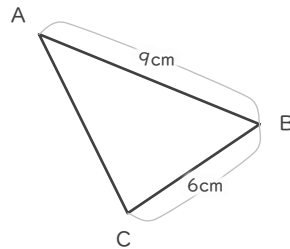
④



⑤



⑥



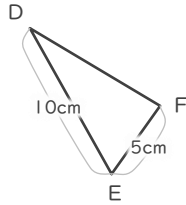
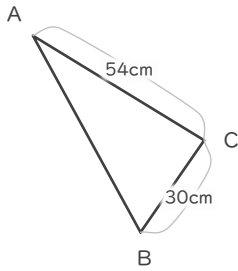
縮図

年 組 名前

/ 6

■ 三角形DEFは三角形ABCの縮図です。それぞれ何分の何の縮図でしょう。

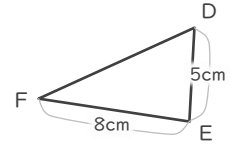
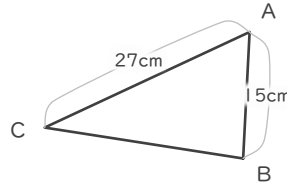
①



$$5 \div 30 = \frac{1}{6}$$

$$\frac{1}{6}$$

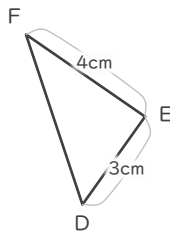
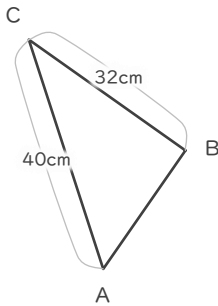
④



$$5 \div 15 = \frac{1}{3}$$

$$\frac{1}{3}$$

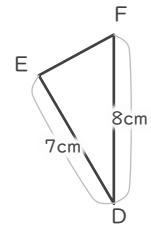
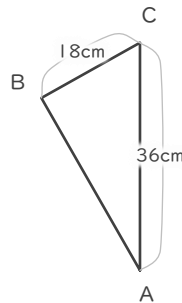
②



$$4 \div 32 = \frac{1}{8}$$

$$\frac{1}{8}$$

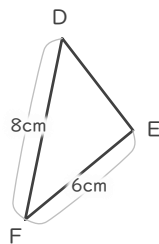
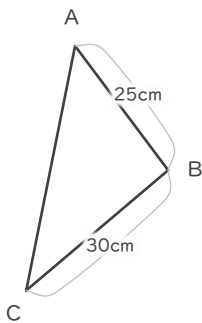
⑤



$$8 \div 36 = \frac{2}{9}$$

$$\frac{2}{9}$$

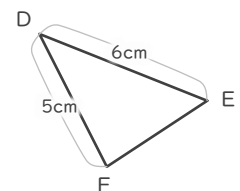
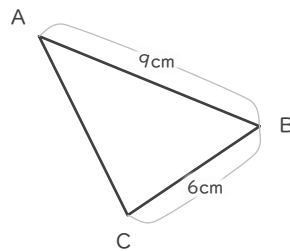
③



$$6 \div 30 = \frac{1}{5}$$

$$\frac{1}{5}$$

⑥



$$6 \div 9 = \frac{2}{3}$$

$$\frac{2}{3}$$