

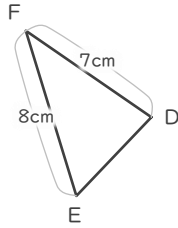
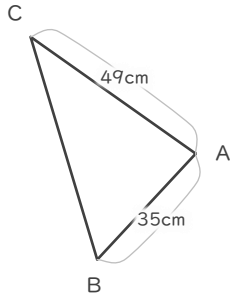
縮図

年 組 名前

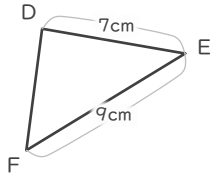
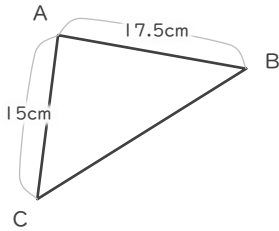
/ 6

■ 三角形DEFは三角形ABCの縮図です。それぞれ何分の何の縮図でしょう。

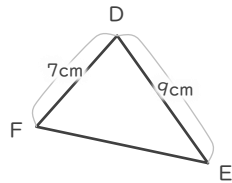
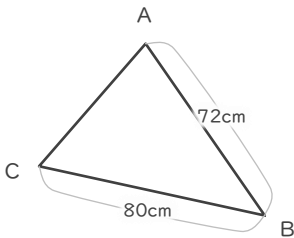
①



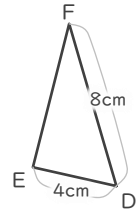
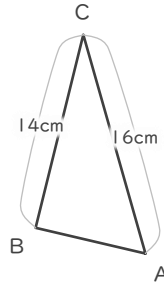
②



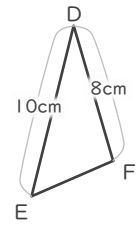
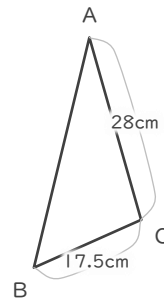
③



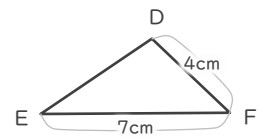
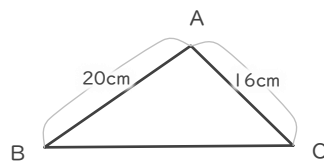
④



⑤



⑥



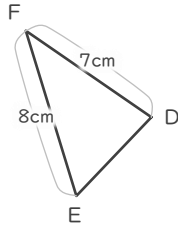
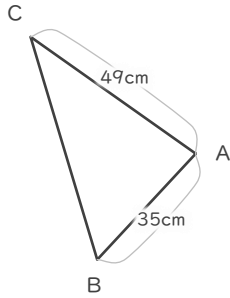
縮図

年 組 名前

/ 6

■ 三角形DEFは三角形ABCの縮図です。それぞれ何分の何の縮図でしょう。

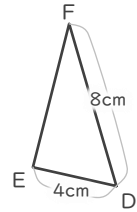
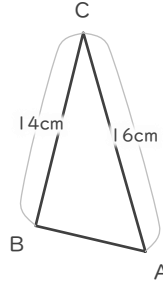
①



$$7 \div 49 = \frac{1}{7}$$

$$\frac{1}{7}$$

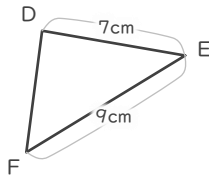
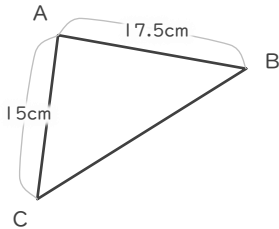
④



$$8 \div 16 = \frac{1}{2}$$

$$\frac{1}{2}$$

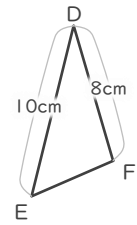
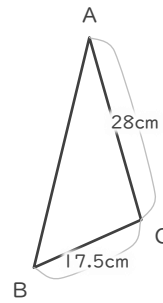
②



$$7 \div 17.5 = \frac{2}{5}$$

$$\frac{2}{5}$$

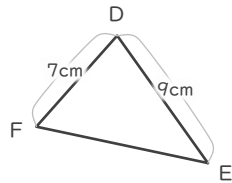
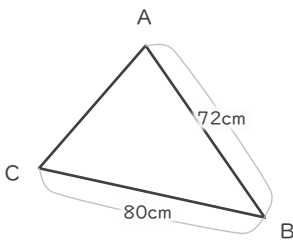
⑤



$$8 \div 28 = \frac{2}{7}$$

$$\frac{2}{7}$$

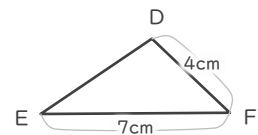
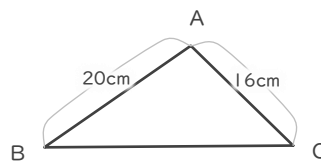
③



$$9 \div 72 = \frac{1}{8}$$

$$\frac{1}{8}$$

⑥



$$4 \div 16 = \frac{1}{4}$$

$$\frac{1}{4}$$