

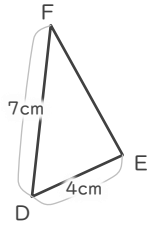
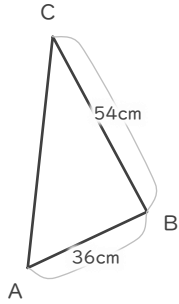
縮図

年 組 名前


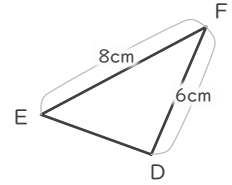
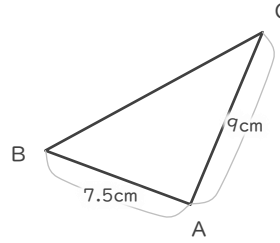
/ 6

■ 三角形DEFは三角形ABCの縮図です。それぞれ何分の何の縮図でしょう。

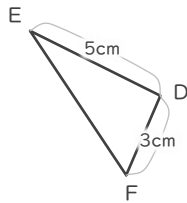
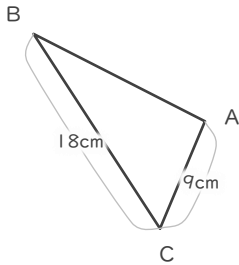
①



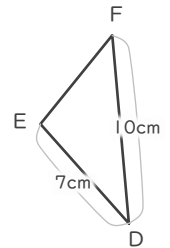
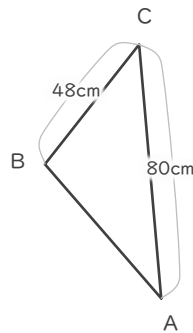
④



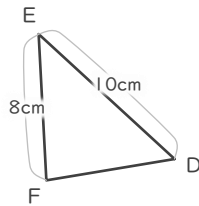
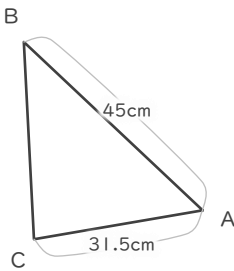
②



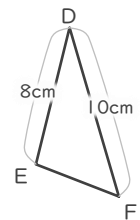
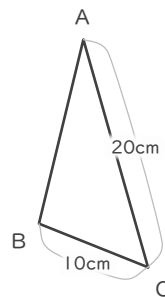
⑤



③



⑥



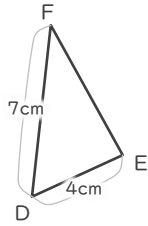
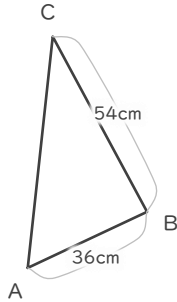
縮図

年 組 名前

/ 6

■ 三角形DEFは三角形ABCの縮図です。それぞれ何分の何の縮図でしょう。

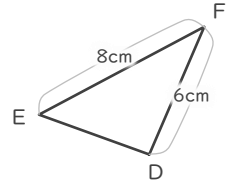
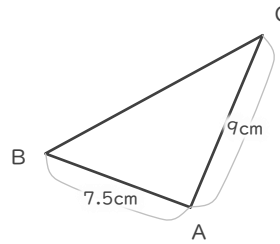
①



$$4 \div 36 = \frac{1}{9}$$

$$\frac{1}{9}$$

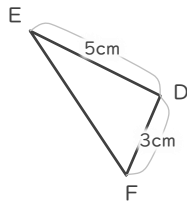
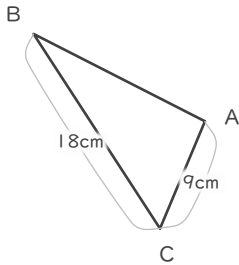
④



$$6 \div 9 = \frac{2}{3}$$

$$\frac{2}{3}$$

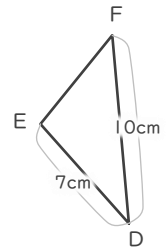
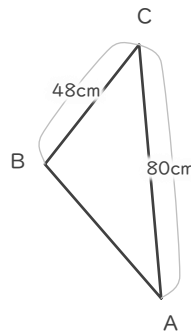
②



$$3 \div 9 = \frac{1}{3}$$

$$\frac{1}{3}$$

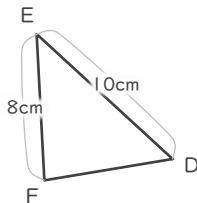
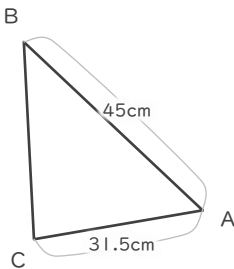
⑤



$$10 \div 80 = \frac{1}{8}$$

$$\frac{1}{8}$$

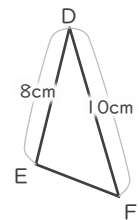
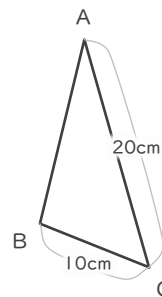
③



$$10 \div 45 = \frac{2}{9}$$

$$\frac{2}{9}$$

⑥



$$10 \div 20 = \frac{1}{2}$$

$$\frac{1}{2}$$