

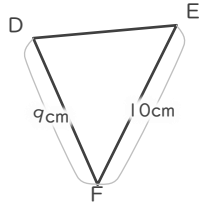
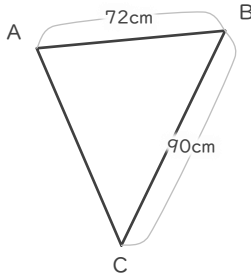
縮図

年 組 名前


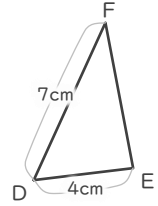
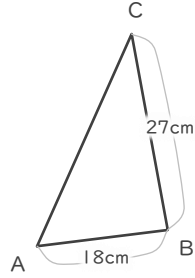
/ 6

■ 三角形DEFは三角形ABCの縮図です。それぞれ何分の何の縮図でしょう。

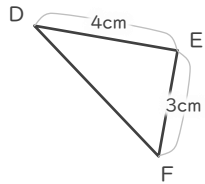
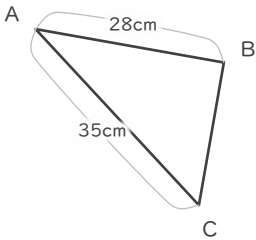
①



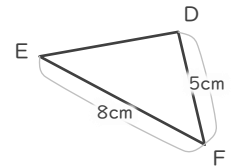
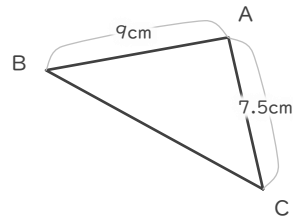
④



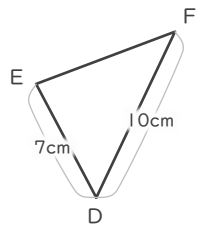
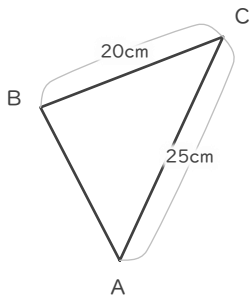
②



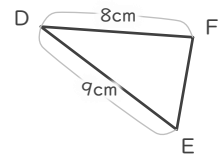
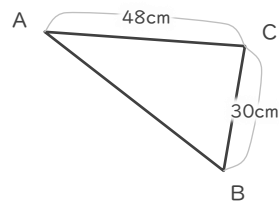
⑤



③



⑥



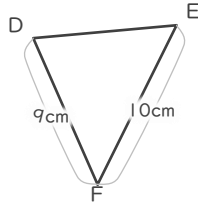
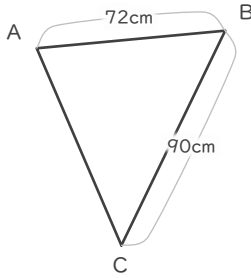
縮図

年 組 名前

/ 6

■ 三角形DEFは三角形ABCの縮図です。それぞれ何分の何の縮図でしょう。

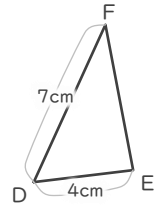
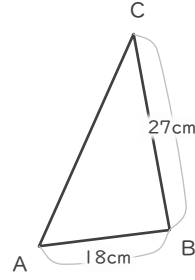
①



$$10 \div 90 = \frac{1}{9}$$

$$\frac{1}{9}$$

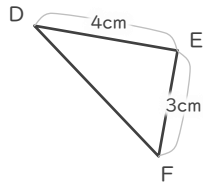
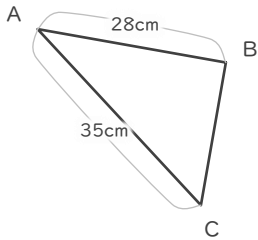
④



$$4 \div 18 = \frac{2}{9}$$

$$\frac{2}{9}$$

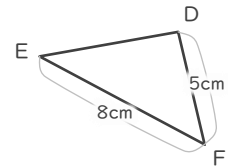
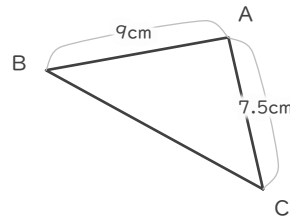
②



$$4 \div 28 = \frac{1}{7}$$

$$\frac{1}{7}$$

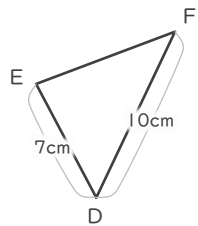
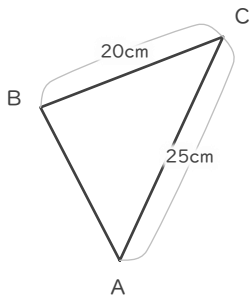
⑤



$$5 \div 7.5 = \frac{2}{3}$$

$$\frac{2}{3}$$

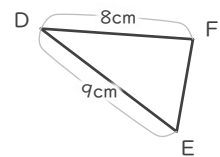
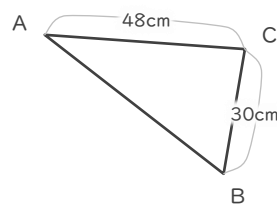
③



$$10 \div 25 = \frac{2}{5}$$

$$\frac{2}{5}$$

⑥



$$8 \div 48 = \frac{1}{6}$$

$$\frac{1}{6}$$