

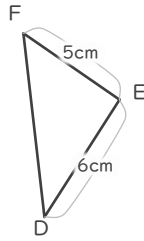
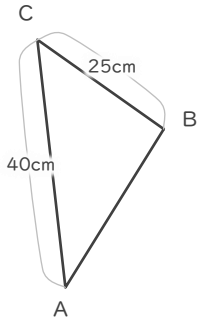
# 縮図

年 組 名前

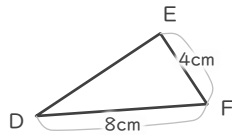
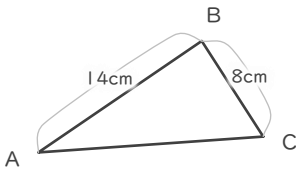
/ 6

■ 三角形DEFは三角形ABCの縮図です。それぞれ何分の何の縮図でしょう。

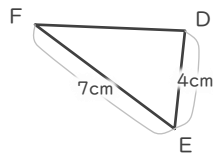
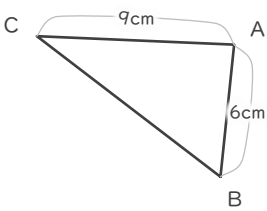
①



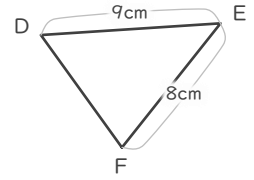
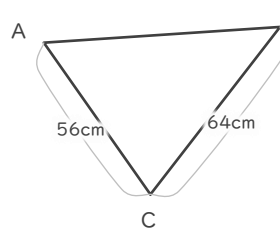
②



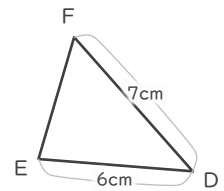
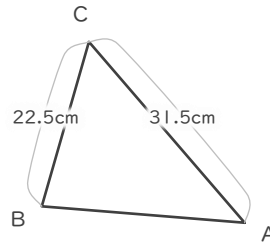
③



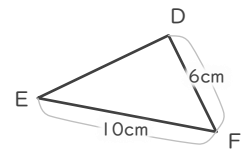
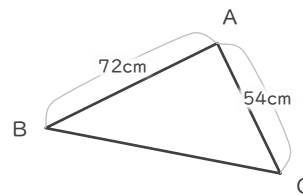
④



⑤



⑥



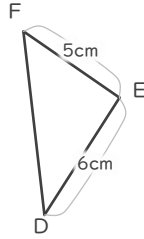
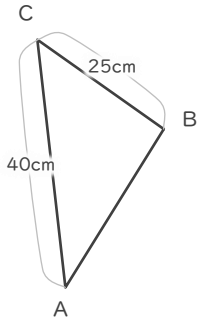
# 縮図

年 組 名前

/ 6

■ 三角形DEFは三角形ABCの縮図です。それぞれ何分の何の縮図でしょう。

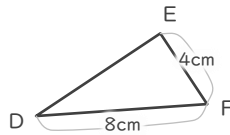
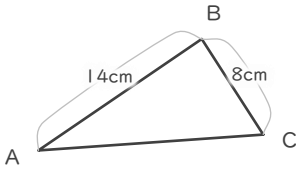
①



$$5 \div 25 = \frac{1}{5}$$

$$\frac{1}{5}$$

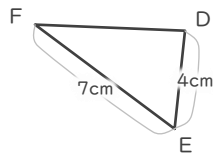
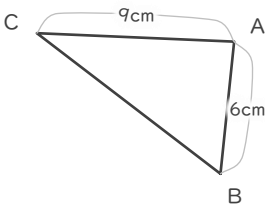
②



$$4 \div 8 = \frac{1}{2}$$

$$\frac{1}{2}$$

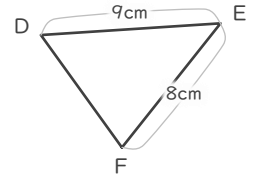
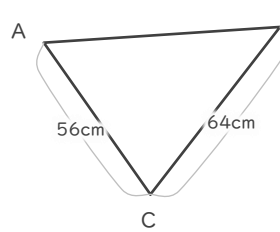
③



$$4 \div 6 = \frac{2}{3}$$

$$\frac{2}{3}$$

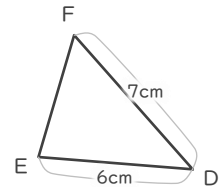
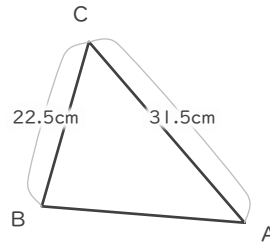
④



$$8 \div 64 = \frac{1}{8}$$

$$\frac{1}{8}$$

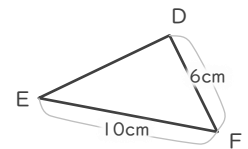
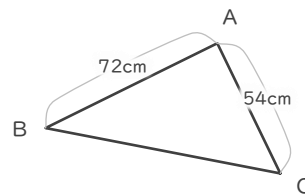
⑤



$$7 \div 31.5 = \frac{2}{9}$$

$$\frac{2}{9}$$

⑥



$$6 \div 54 = \frac{1}{9}$$

$$\frac{1}{9}$$