

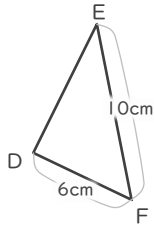
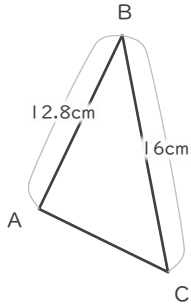
縮図

年 組 名前

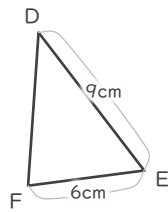
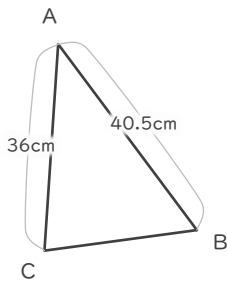
/ 6

■ 三角形DEFは三角形ABCの縮図です。それぞれ何分の何の縮図でしょう。

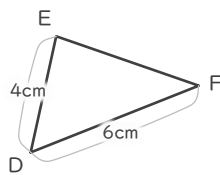
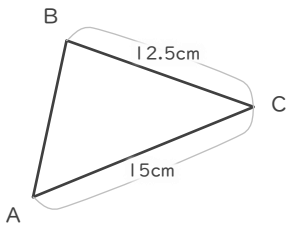
①



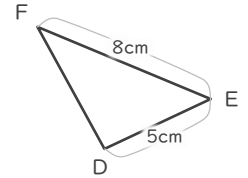
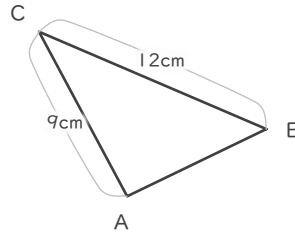
②



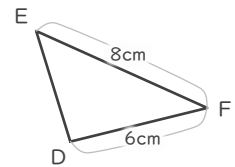
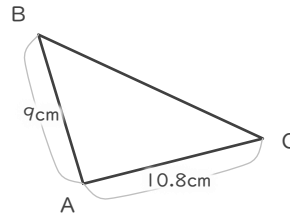
③



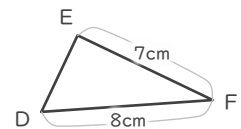
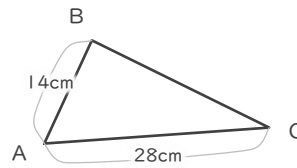
④



⑤



⑥



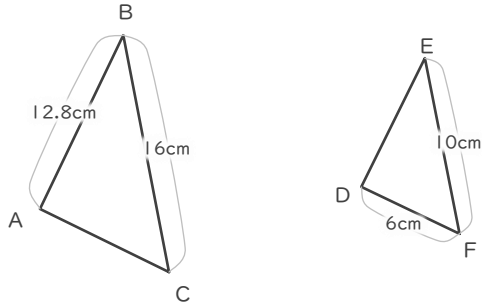
縮図

年 組 名前

/ 6

■ 三角形DEFは三角形ABCの縮図です。それぞれ何分の何の縮図でしょう。

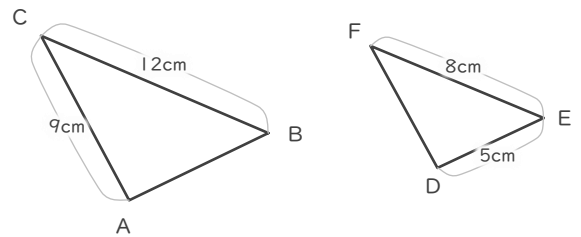
①



$$10 \div 16 = \frac{5}{8}$$

$$\frac{5}{8}$$

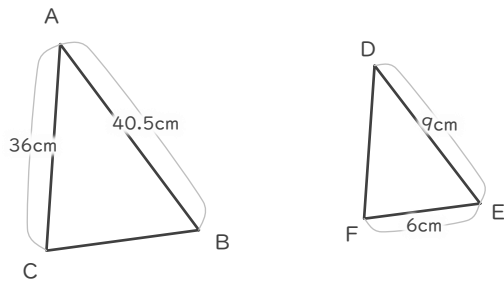
④



$$8 \div 12 = \frac{2}{3}$$

$$\frac{2}{3}$$

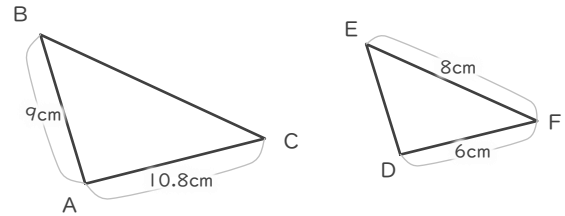
②



$$9 \div 40.5 = \frac{2}{9}$$

$$\frac{2}{9}$$

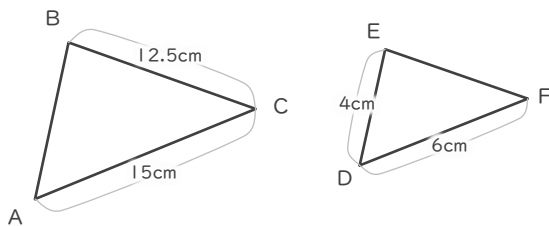
⑤



$$6 \div 10.8 = \frac{5}{9}$$

$$\frac{5}{9}$$

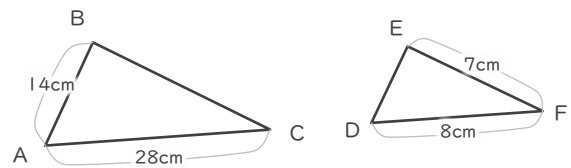
③



$$6 \div 15 = \frac{2}{5}$$

$$\frac{2}{5}$$

⑥



$$8 \div 28 = \frac{2}{7}$$

$$\frac{2}{7}$$