

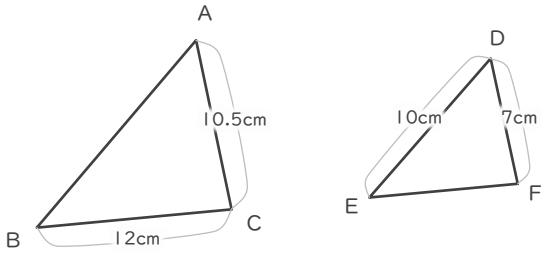
# 縮図

年 組 名前

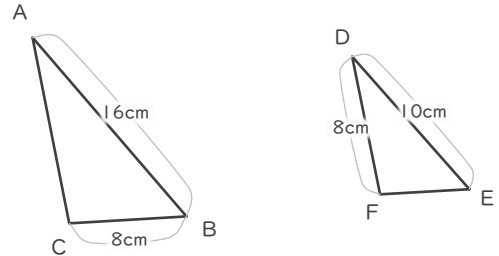
/ 6

■ 三角形DEFは三角形ABCの縮図です。それぞれ何分の何の縮図でしょう。

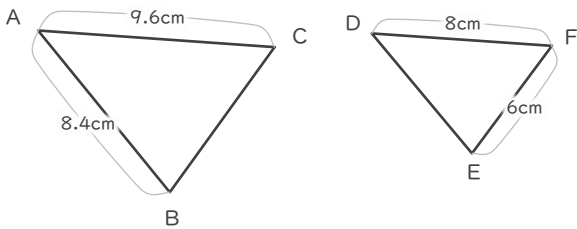
①



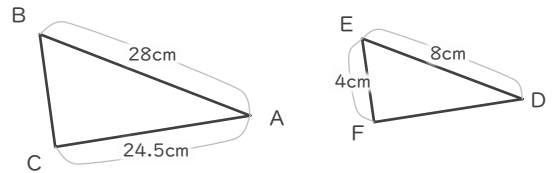
④



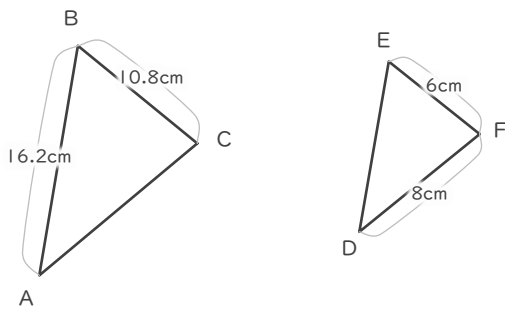
②



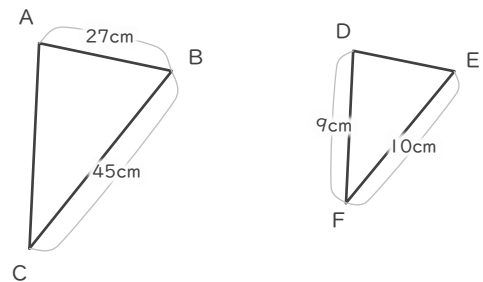
⑤



③



⑥



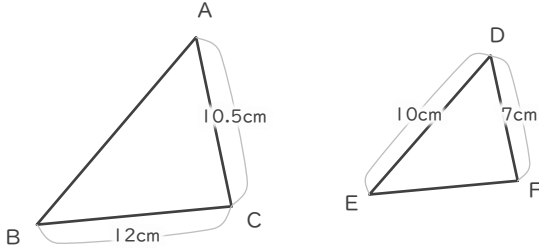
# 縮図

年 組 名前

/ 6

■ 三角形DEFは三角形ABCの縮図です。それぞれ何分の何の縮図でしょう。

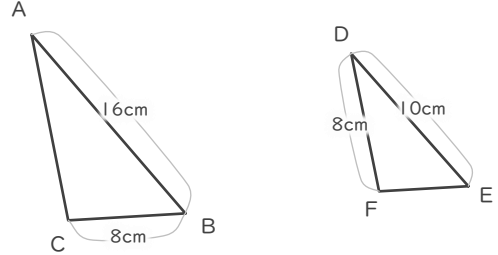
①



$$7 \div 10.5 = \frac{2}{3}$$

$$\frac{2}{3}$$

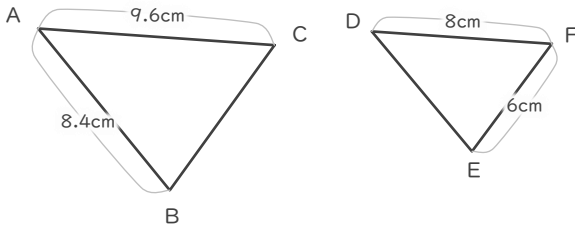
④



$$10 \div 16 = \frac{5}{8}$$

$$\frac{5}{8}$$

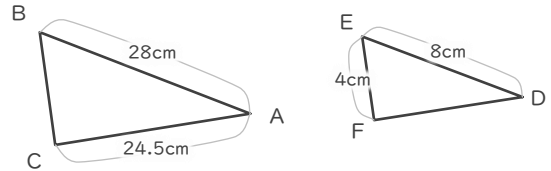
②



$$8 \div 9.6 = \frac{5}{6}$$

$$\frac{5}{6}$$

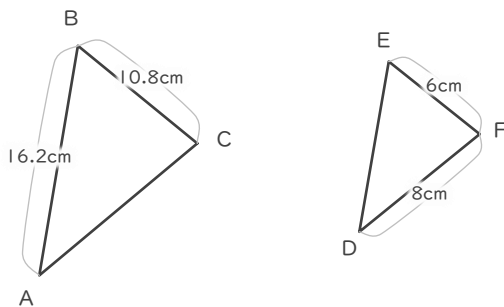
⑤



$$8 \div 28 = \frac{2}{7}$$

$$\frac{2}{7}$$

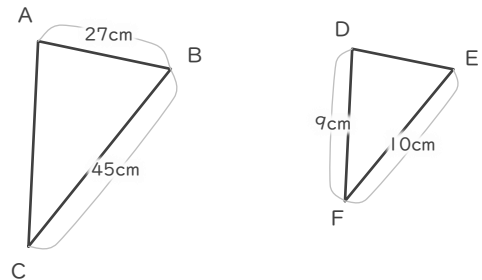
③



$$6 \div 10.8 = \frac{5}{9}$$

$$\frac{5}{9}$$

⑥



$$10 \div 45 = \frac{2}{9}$$

$$\frac{2}{9}$$