

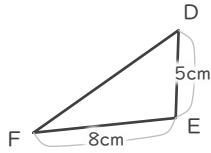
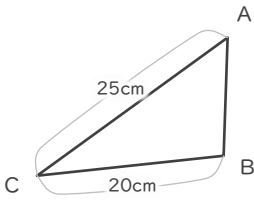
縮図

年 組 名前

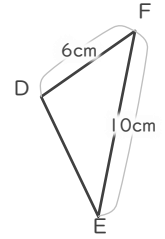
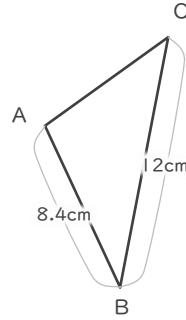
/ 6

■ 三角形DEFは三角形ABCの縮図です。それぞれ何分の何の縮図でしょう。

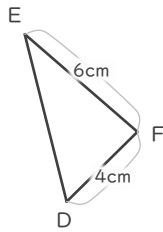
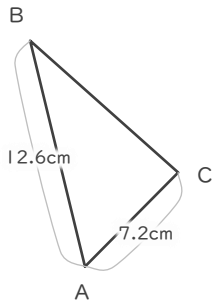
①



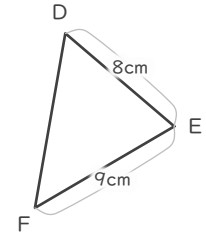
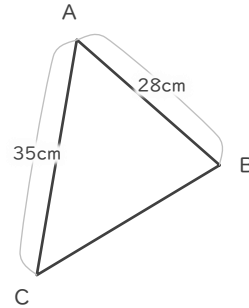
④



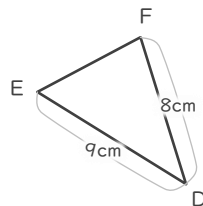
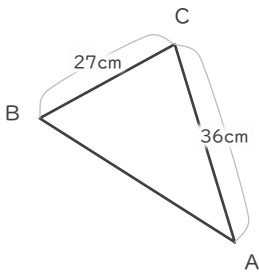
②



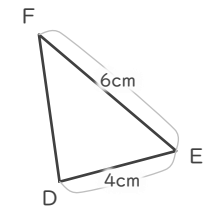
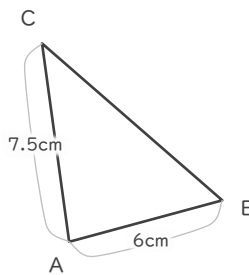
⑤



③



⑥



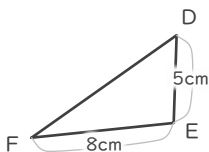
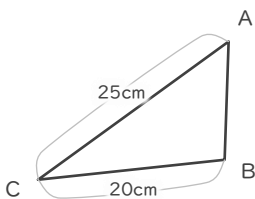
縮図

年 組 名前

/ 6

■ 三角形DEFは三角形ABCの縮図です。それぞれ何分の何の縮図でしょう。

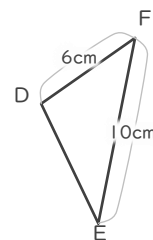
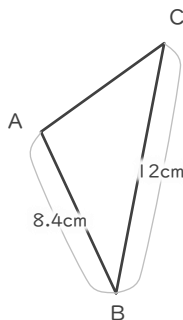
①



$$8 \div 20 = \frac{2}{5}$$

$$\frac{2}{5}$$

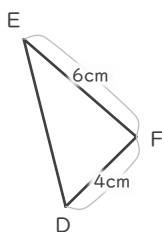
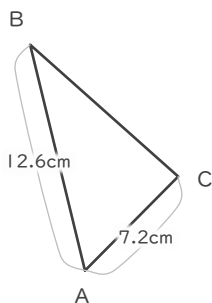
④



$$10 \div 12 = \frac{5}{6}$$

$$\frac{5}{6}$$

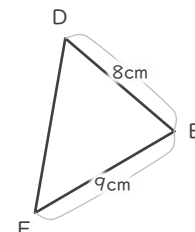
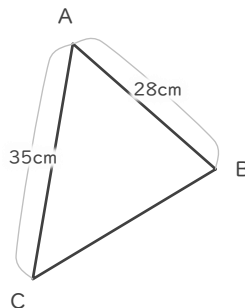
②



$$4 \div 7.2 = \frac{5}{9}$$

$$\frac{5}{9}$$

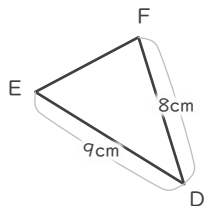
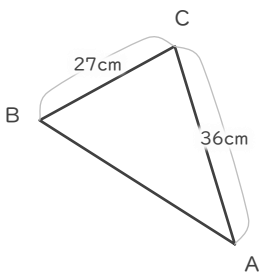
⑤



$$8 \div 28 = \frac{2}{7}$$

$$\frac{2}{7}$$

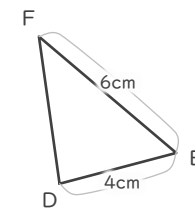
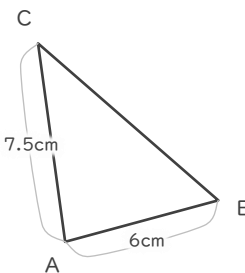
③



$$8 \div 36 = \frac{2}{9}$$

$$\frac{2}{9}$$

⑥



$$4 \div 6 = \frac{2}{3}$$

$$\frac{2}{3}$$