

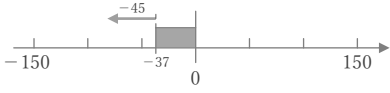
# 正負の数の加法

年 組 名前

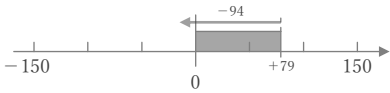
/24

■ 次のたし算をしなさい。

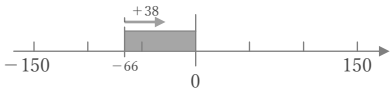
①  $(-37) + (-45) =$



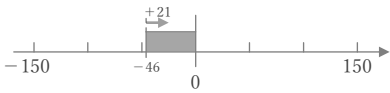
②  $(+79) + (-94) =$



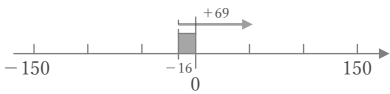
③  $(-66) + (+38) =$



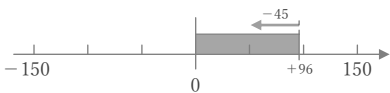
④  $(-46) + (+21) =$



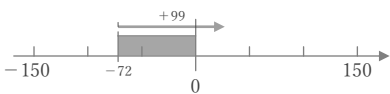
⑤  $(-16) + (+69) =$



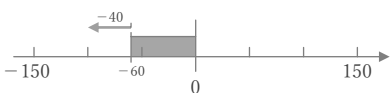
⑥  $(+96) + (-45) =$



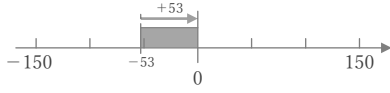
⑦  $(-72) + (+99) =$



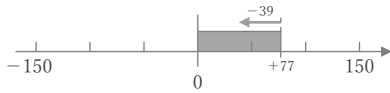
⑧  $(-60) + (-40) =$



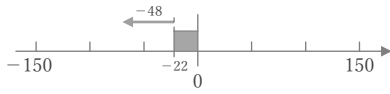
⑨  $(-53) + (+53) =$



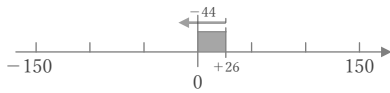
⑩  $(+77) + (-39) =$



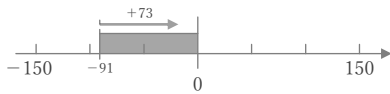
⑪  $(-22) + (-48) =$



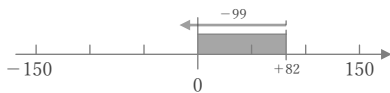
⑫  $(+26) + (-44) =$



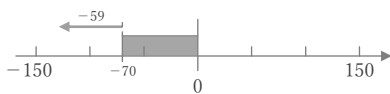
⑬  $(-91) + (+73) =$



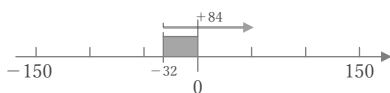
⑭  $(+82) + (-99) =$



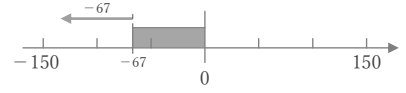
⑮  $(-70) + (-59) =$



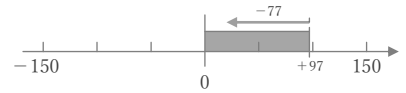
⑯  $(-32) + (+84) =$



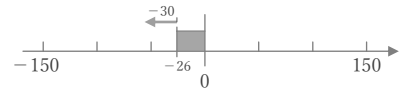
⑰  $(-67) + (-67) =$



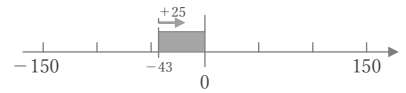
⑱  $(+97) + (-77) =$



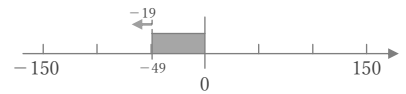
⑲  $(-26) + (-30) =$



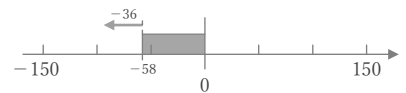
⑳  $(-43) + (+25) =$



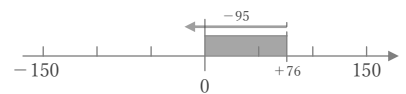
㉑  $(-49) + (-19) =$



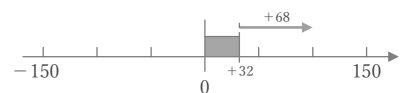
㉒  $(-58) + (-36) =$



㉓  $(+76) + (-95) =$



㉔  $(+32) + (+68) =$



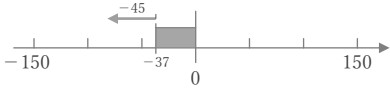
# 正負の数の加法

年 組 名前

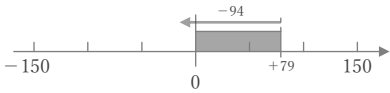
/24

■ 次のたし算をしなさい。

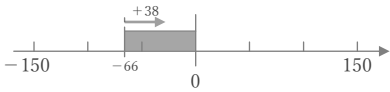
①  $(-37) + (-45) = -82$



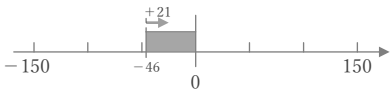
②  $(+79) + (-94) = -15$



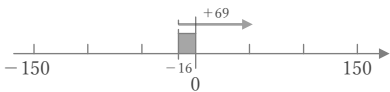
③  $(-66) + (+38) = -28$



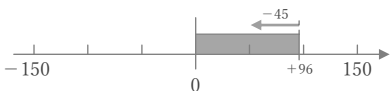
④  $(-46) + (+21) = -25$



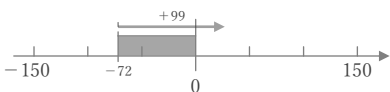
⑤  $(-16) + (+69) = +53$



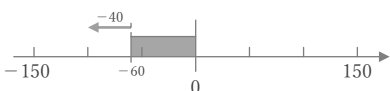
⑥  $(+96) + (-45) = +51$



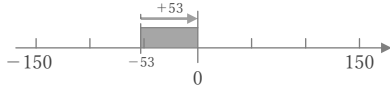
⑦  $(-72) + (+99) = +27$



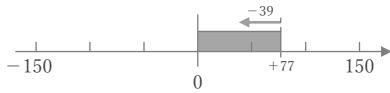
⑧  $(-60) + (-40) = -100$



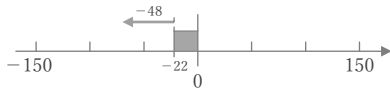
⑨  $(-53) + (+53) = 0$



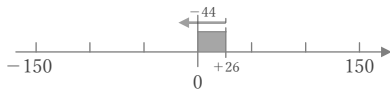
⑩  $(+77) + (-39) = +38$



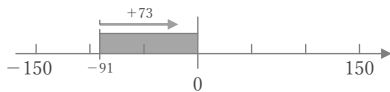
⑪  $(-22) + (-48) = -70$



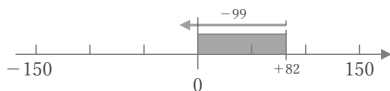
⑫  $(+26) + (-44) = -18$



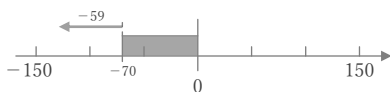
⑬  $(-91) + (+73) = -18$



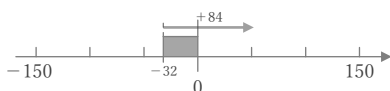
⑭  $(+82) + (-99) = -17$



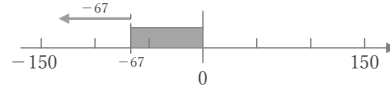
⑮  $(-70) + (-59) = -129$



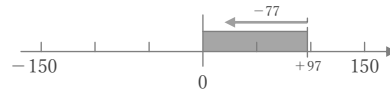
⑯  $(-32) + (+84) = +52$



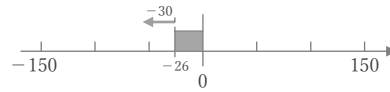
⑰  $(-67) + (-67) = -134$



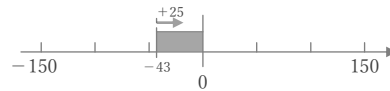
⑱  $(+97) + (-77) = +20$



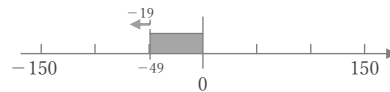
⑲  $(-26) + (-30) = -56$



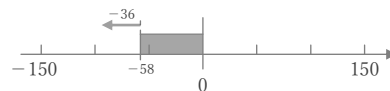
⑳  $(-43) + (+25) = -18$



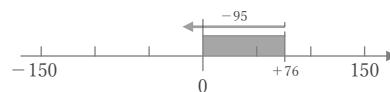
㉑  $(-49) + (-19) = -68$



㉒  $(-58) + (-36) = -94$



㉓  $(+76) + (-95) = -19$



㉔  $(+32) + (+68) = +100$

