

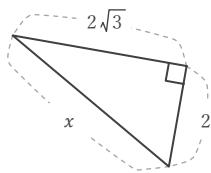
三平方の定理

____年 ____組 名前

/16

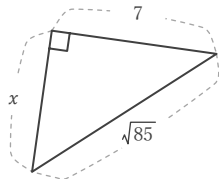
■ 次の直角三角形において、 x の長さを求めなさい。

①



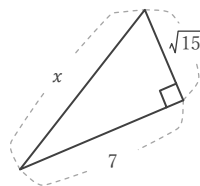
$x =$

⑤



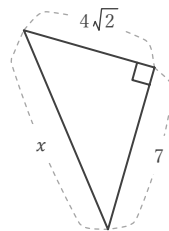
$x =$

⑨



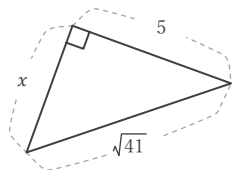
$x =$

⑬



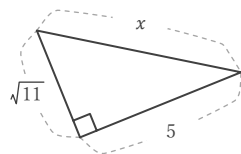
$x =$

②



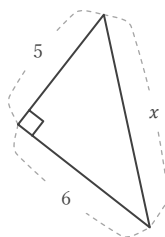
$x =$

⑥



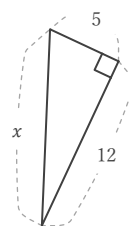
$x =$

⑩



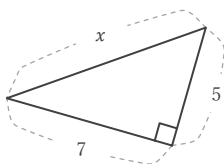
$x =$

⑭



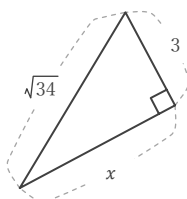
$x =$

③



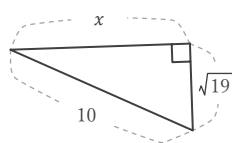
$x =$

⑦



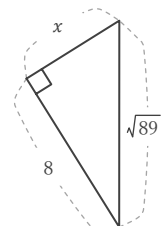
$x =$

⑪



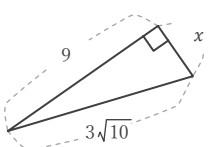
$x =$

⑮



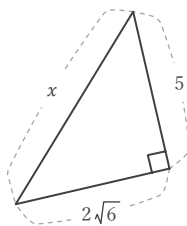
$x =$

④



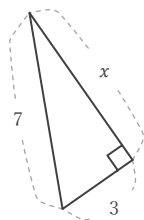
$x =$

⑧



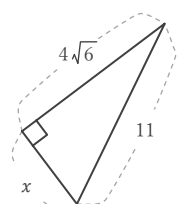
$x =$

⑫



$x =$

⑯



$x =$

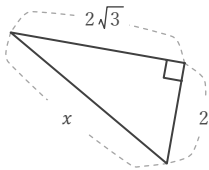
三平方の定理

年 組 名前

/16

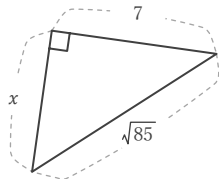
■ 次の直角三角形において、 x の長さを求めなさい。

①



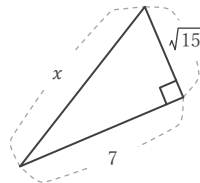
$x = 4$

⑤



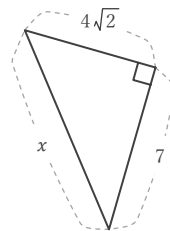
$x = 6$

⑨



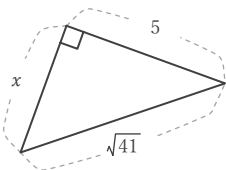
$x = 8$

⑬



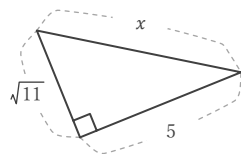
$x = 9$

②



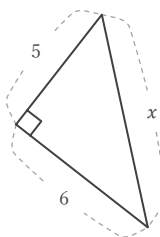
$x = 4$

⑥



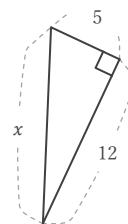
$x = 6$

⑩



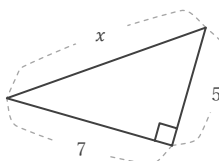
$x = \sqrt{61}$

⑭



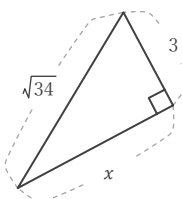
$x = 13$

③



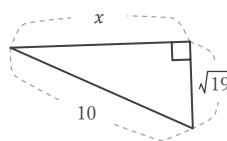
$x = \sqrt{74}$

⑦



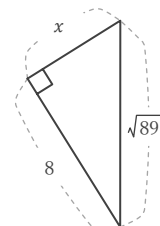
$x = 5$

⑪



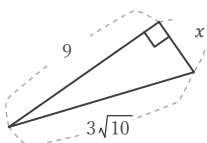
$x = 9$

⑮



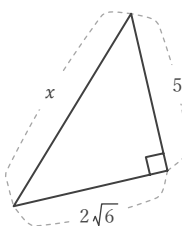
$x = 5$

④



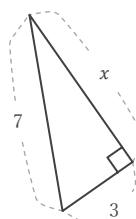
$x = 3$

⑧



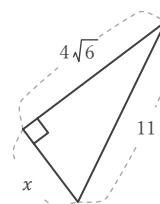
$x = 7$

⑫



$x = 2\sqrt{10}$

⑯



$x = 5$