

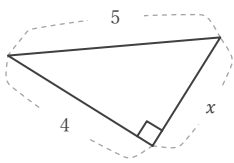
三平方の定理

年 組 名前

/16

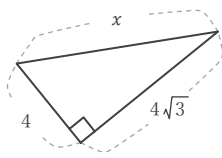
■ 次の直角三角形において、 x の長さを求めなさい。

①



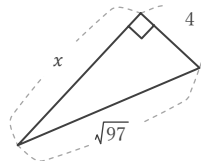
$x =$

⑤



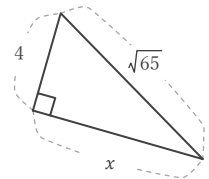
$x =$

⑨



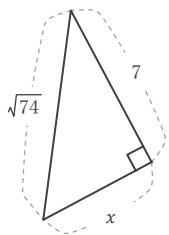
$x =$

⑬



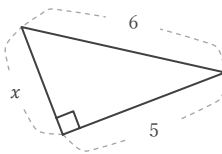
$x =$

②



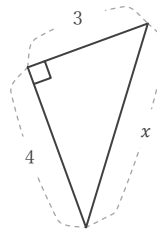
$x =$

⑥



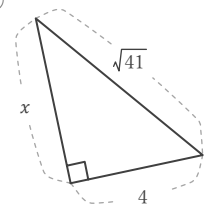
$x =$

⑩



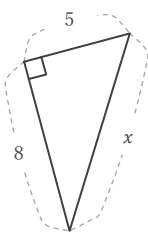
$x =$

⑭



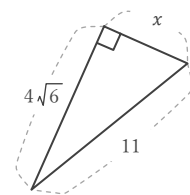
$x =$

③



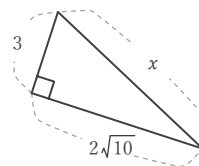
$x =$

⑦



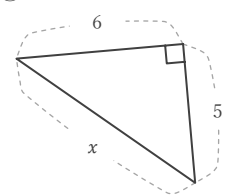
$x =$

⑪



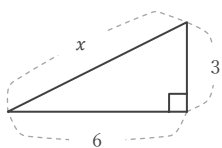
$x =$

⑮



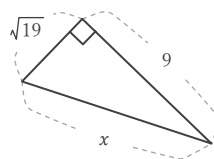
$x =$

④



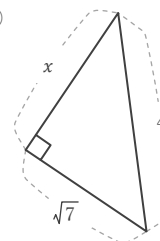
$x =$

⑧



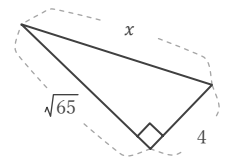
$x =$

⑫



$x =$

⑯



$x =$

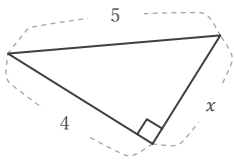
三平方の定理

年 組 名前

/16

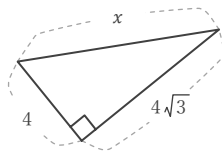
■ 次の直角三角形において、 x の長さを求めなさい。

①



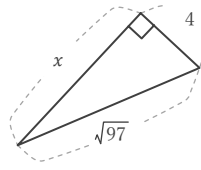
$$x = 3$$

⑤



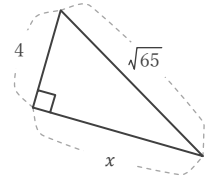
$$x = 8$$

⑨



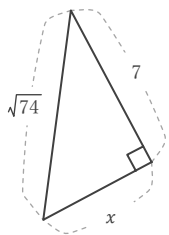
$$x = 9$$

⑬



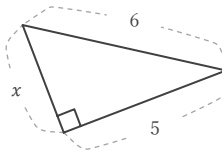
$$x = 7$$

②



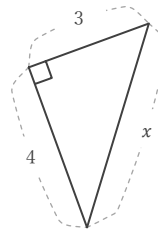
$$x = 5$$

⑥



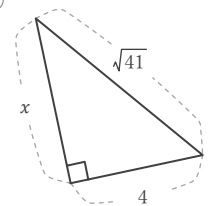
$$x = \sqrt{11}$$

⑩



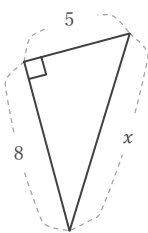
$$x = 5$$

⑭



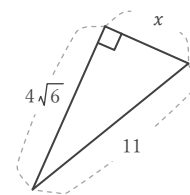
$$x = 5$$

③



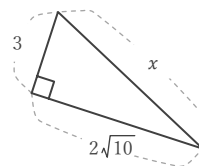
$$x = \sqrt{89}$$

⑦



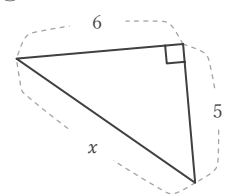
$$x = 5$$

⑪



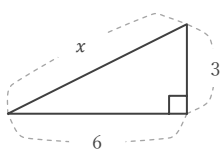
$$x = 7$$

⑮



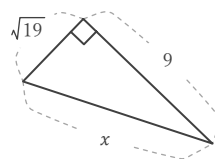
$$x = \sqrt{61}$$

④



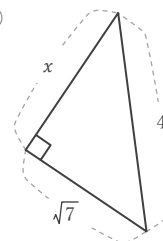
$$x = 3\sqrt{5}$$

⑧



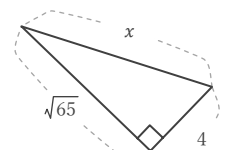
$$x = 10$$

⑫



$$x = 3$$

⑯



$$x = 9$$