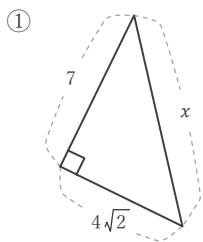


三平方の定理

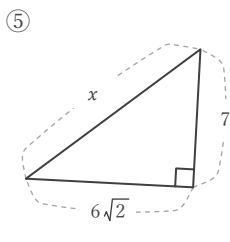
年 組 名前

/16

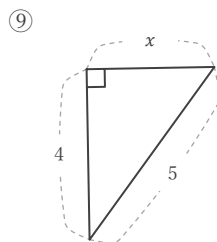
■ 次の直角三角形において、 x の長さを求めなさい。



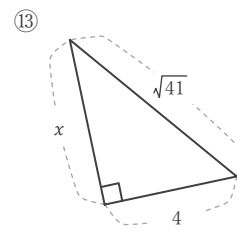
$x =$



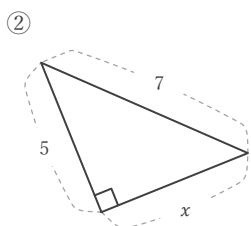
$x =$



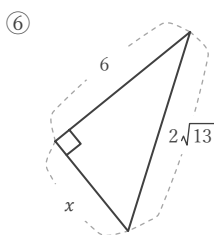
$x =$



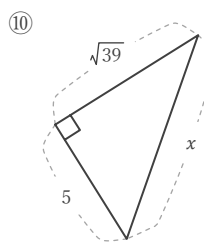
$x =$



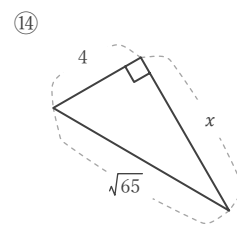
$x =$



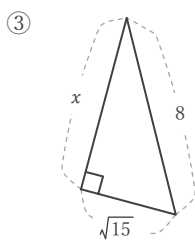
$x =$



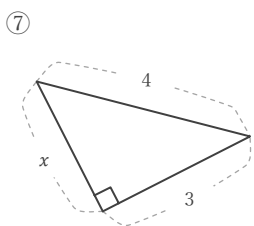
$x =$



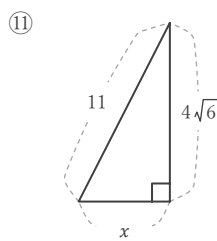
$x =$



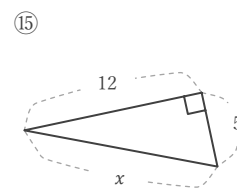
$x =$



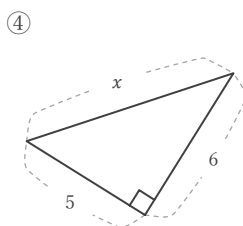
$x =$



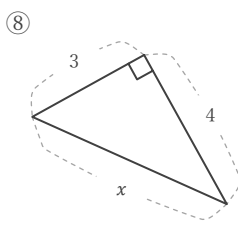
$x =$



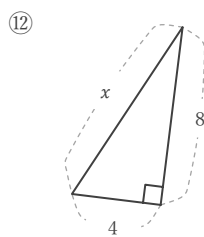
$x =$



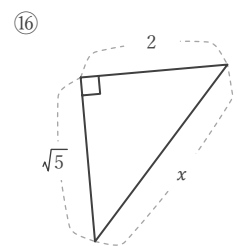
$x =$



$x =$



$x =$



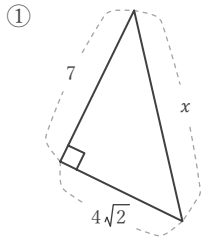
$x =$

三平方の定理

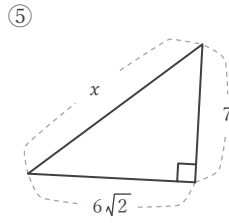
年 組 名前

/16

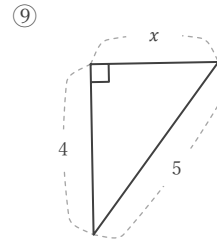
■ 次の直角三角形において、 x の長さを求めなさい。



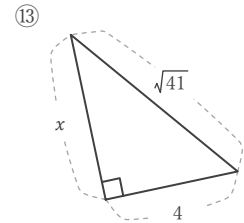
$x = 9$



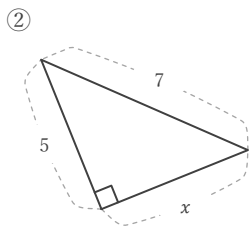
$x = 11$



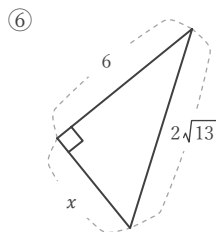
$x = 3$



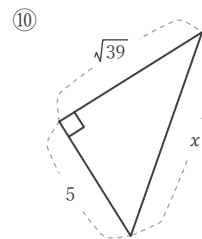
$x = 5$



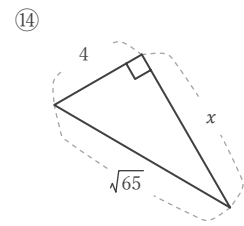
$x = 2\sqrt{6}$



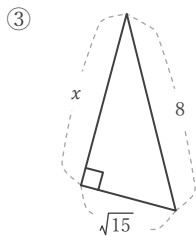
$x = 4$



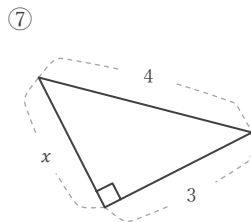
$x = 8$



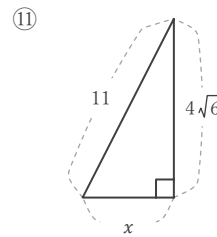
$x = 7$



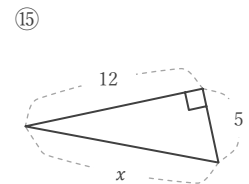
$x = 7$



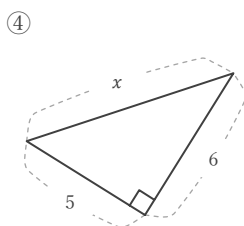
$x = \sqrt{7}$



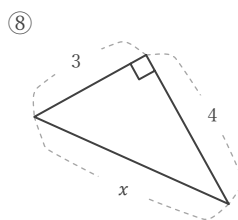
$x = 5$



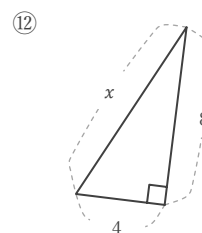
$x = 13$



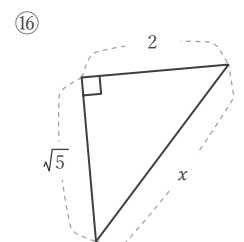
$x = \sqrt{61}$



$x = 5$



$x = 4\sqrt{5}$



$x = 3$