

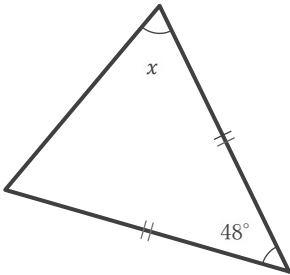
# 二等辺三角形の角の大きさ

\_\_\_\_年 \_\_\_\_組 名前

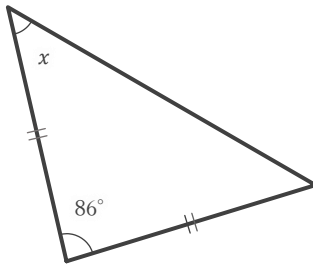
\_\_\_\_ / 9

■ 下のそれぞれの二等辺三角形における  $\angle x$  の大きさを求めなさい。

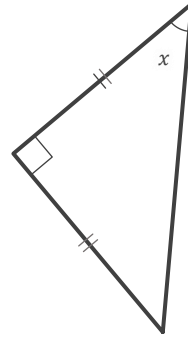
①



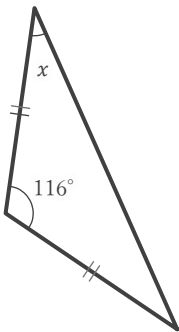

②



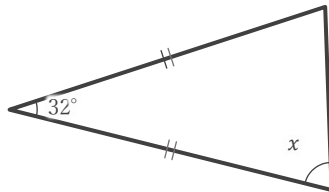

③



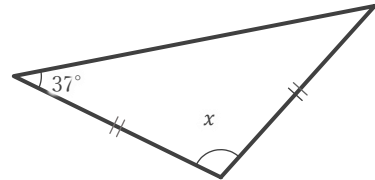

④



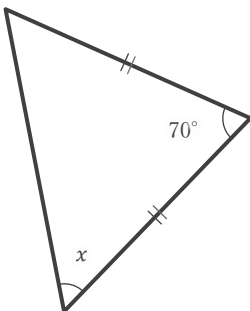

⑤



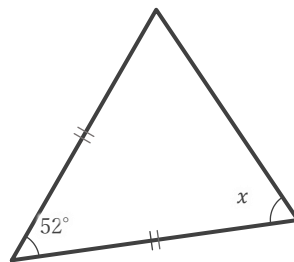

⑥



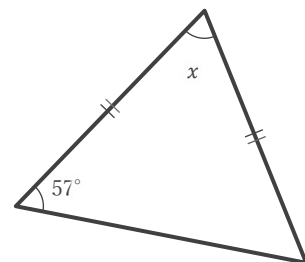

⑦




⑧




⑨



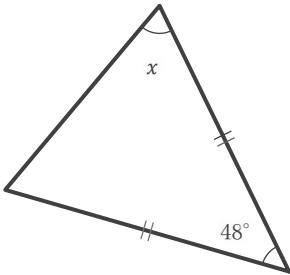
# 二等辺三角形の角の大きさ

\_\_\_\_年 \_\_\_\_組 名前

\_\_\_\_ / 9

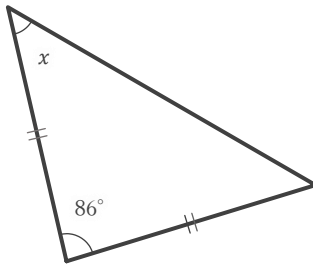
■ 下のそれぞれの二等辺三角形における  $\angle x$  の大きさを求めなさい。

①



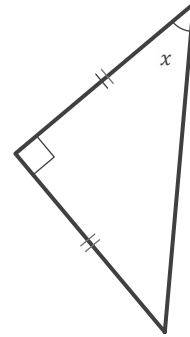
66°

②



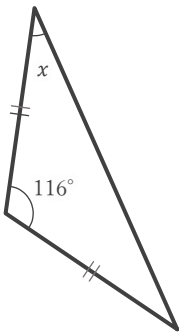
47°

③



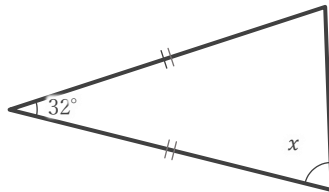
45°

④



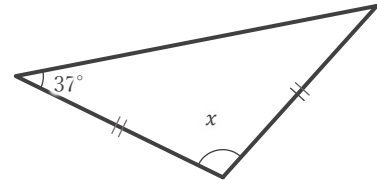
32°

⑤



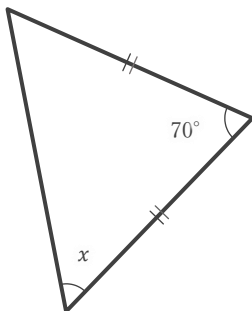
74°

⑥



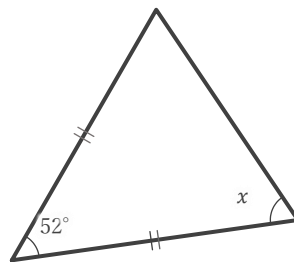
106°

⑦



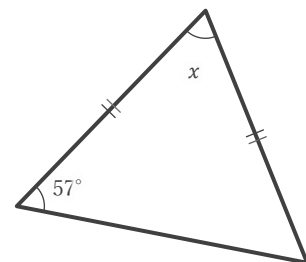
55°

⑧



64°

⑨



66°