

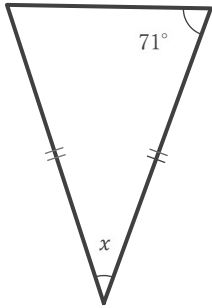
二等辺三角形の角の大きさ

____年 ____組 名前

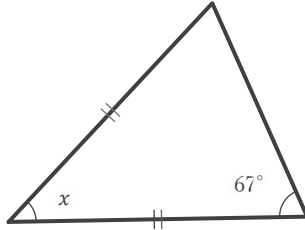
____ / 9

■ 下のそれぞれの二等辺三角形における $\angle x$ の大きさを求めなさい。

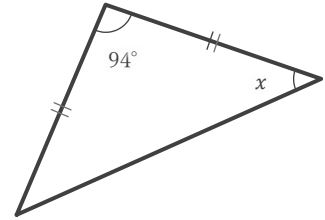
①



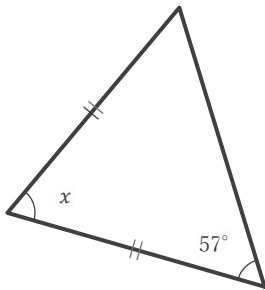
②



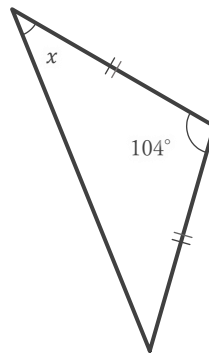
③



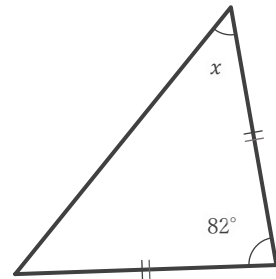
④



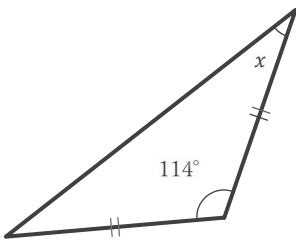
⑤



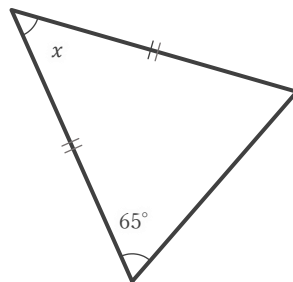
⑥



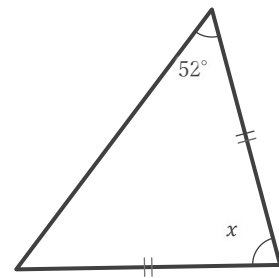
⑦



⑧



⑨



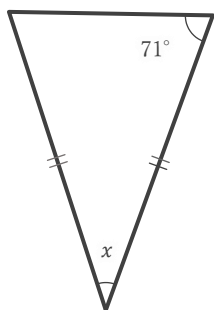
二等辺三角形の角の大きさ

____年 ____組 名前

____ / 9

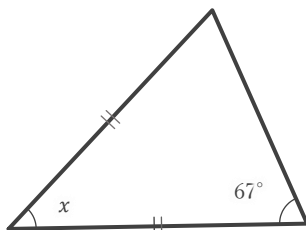
■ 下のそれぞれの二等辺三角形における $\angle x$ の大きさを求めなさい。

①



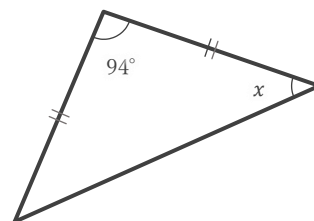
38°

②



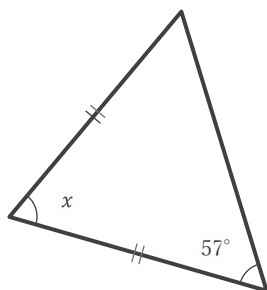
46°

③



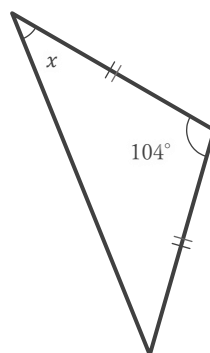
43°

④



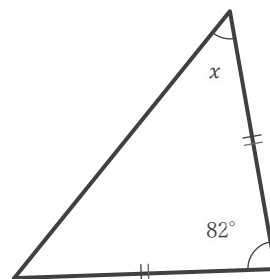
66°

⑤



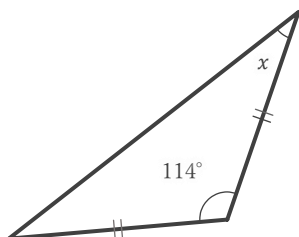
38°

⑥



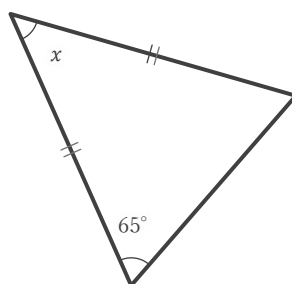
49°

⑦



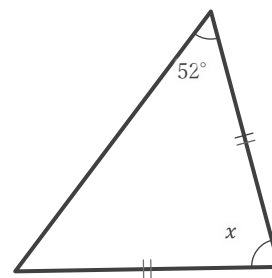
33°

⑧



50°

⑨



76°