

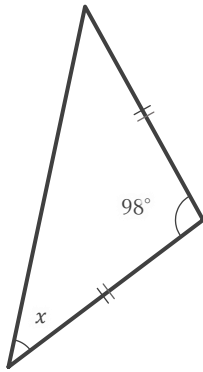
# 二等辺三角形の角の大きさ

\_\_\_\_年 \_\_\_\_組 名前 \_\_\_\_\_

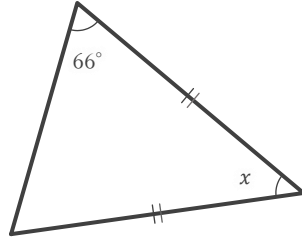
\_\_\_\_ / 9

■ 下のそれぞれの二等辺三角形における  $\angle x$  の大きさを求めなさい。

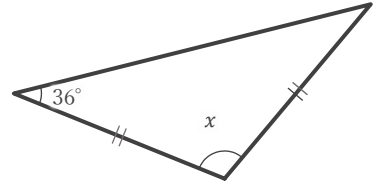
①



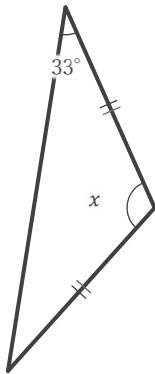

②



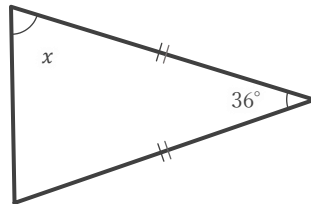

③



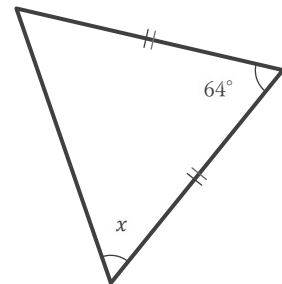

④



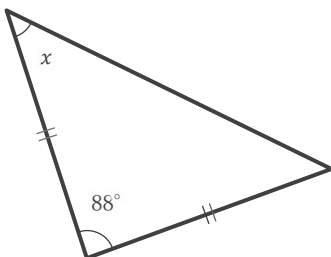

⑤



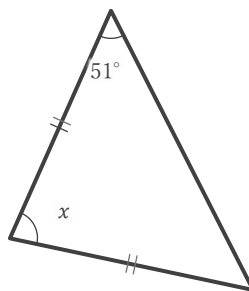

⑥



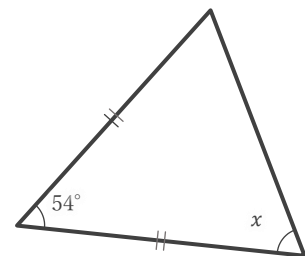

⑦




⑧




⑨



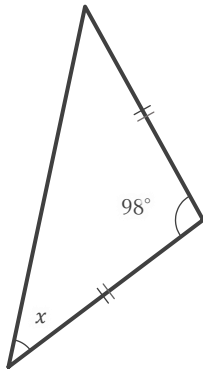
二等辺三角形の角の大きさ

\_\_\_\_年 \_\_\_\_組 名前

\_\_\_\_ / 9

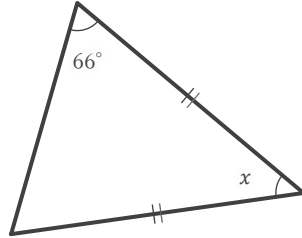
■ 下のそれぞれの二等辺三角形における  $\angle x$  の大きさを求めなさい。

①



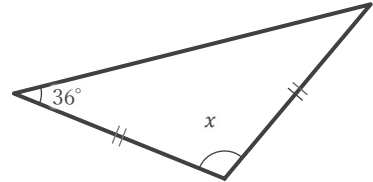
41°

②



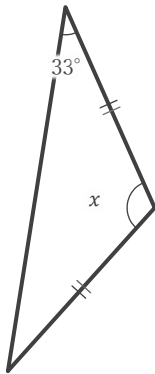
48°

③



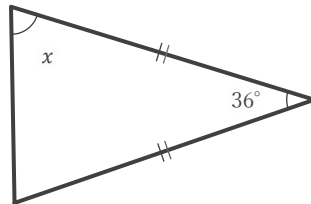
108°

④



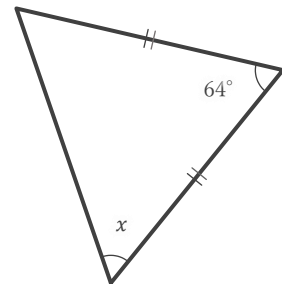
114°

⑤



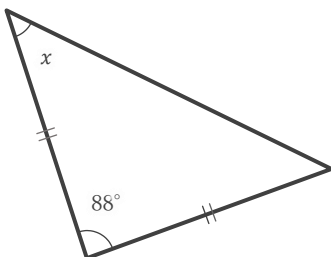
72°

⑥



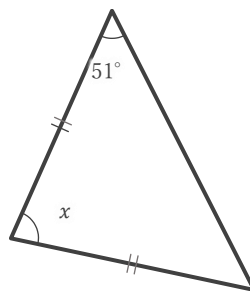
58°

⑦



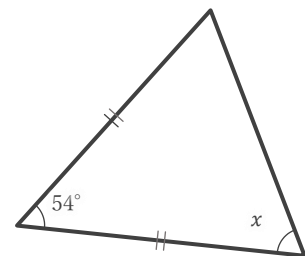
46°

⑧



78°

⑨



63°