

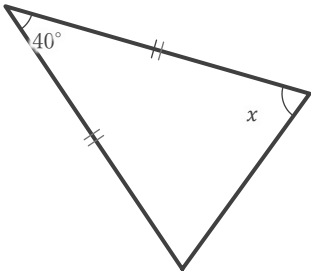
二等辺三角形の角の大きさ

\_\_\_\_年 \_\_\_\_組 名前

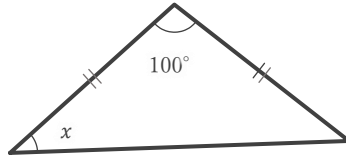
\_\_\_\_ / 9

■ 下のそれぞれの二等辺三角形における  $\angle x$  の大きさを求めなさい。

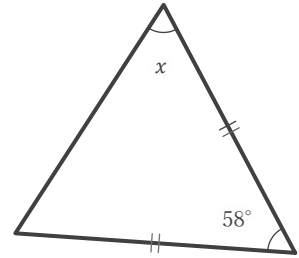
①



②



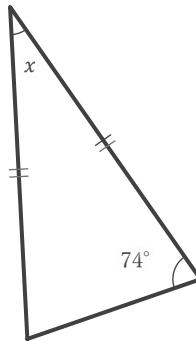
③



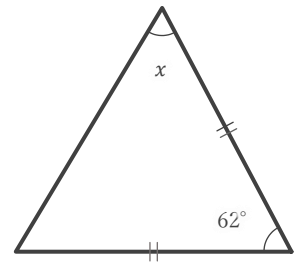
④



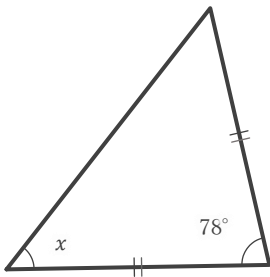
⑤



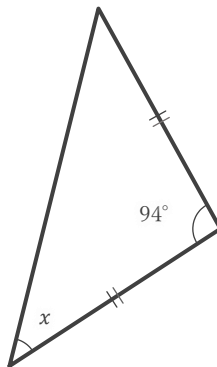
⑥



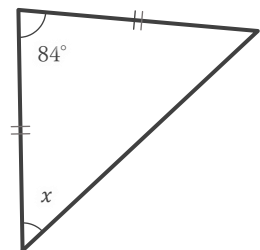
⑦



⑧



⑨



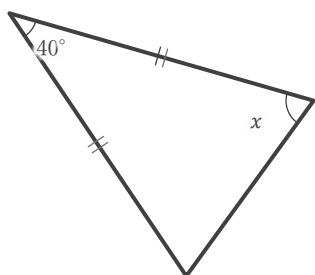
# 二等辺三角形の角の大きさ

\_\_\_\_年 \_\_\_\_組 名前 \_\_\_\_\_

\_\_\_\_ / 9

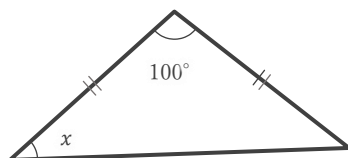
■ 下のそれぞれの二等辺三角形における  $\angle x$  の大きさを求めなさい。

①



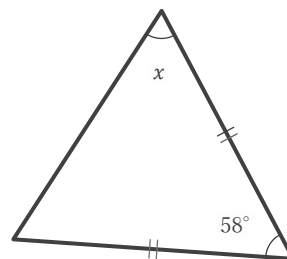
70°

②



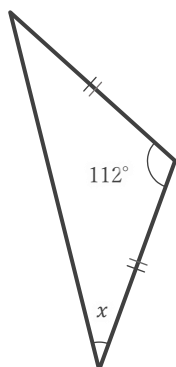
40°

③



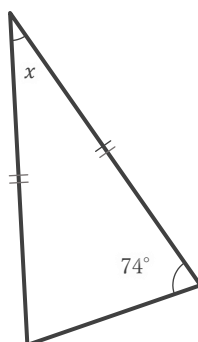
61°

④



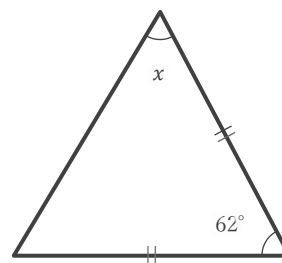
34°

⑤



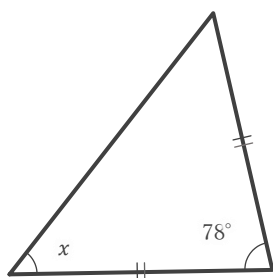
32°

⑥



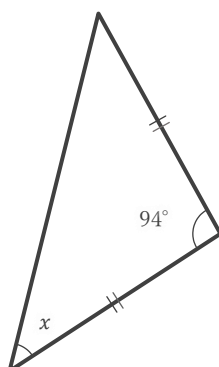
59°

⑦



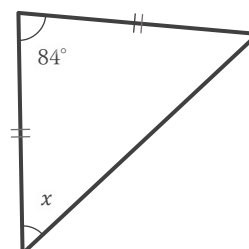
51°

⑧



43°

⑨



48°