

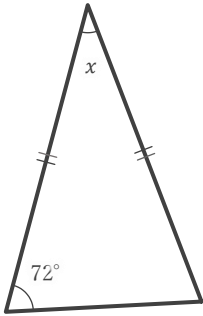
# 二等辺三角形の角の大きさ

\_\_\_\_年 \_\_\_\_組 名前

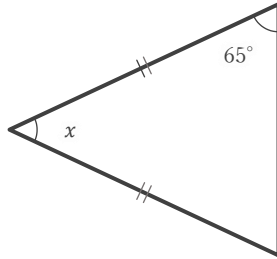
\_\_\_\_ / 9

■ 下のそれぞれの二等辺三角形における  $\angle x$  の大きさを求めなさい。

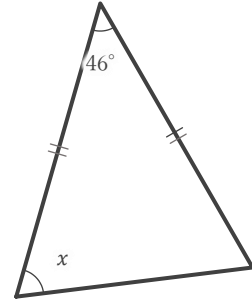
①



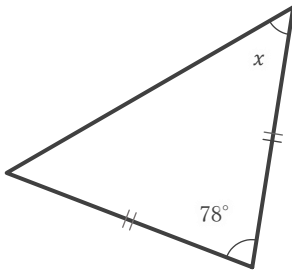

②



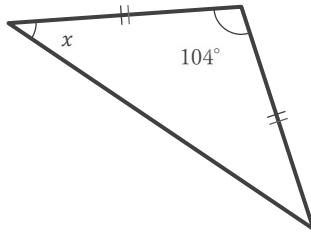

③



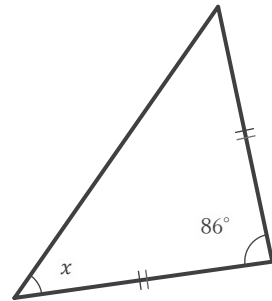

④



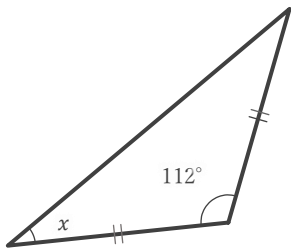

⑤



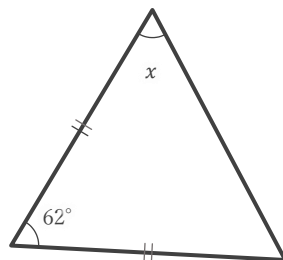

⑥



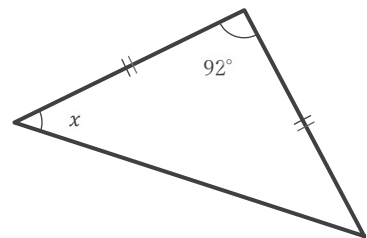

⑦




⑧




⑨



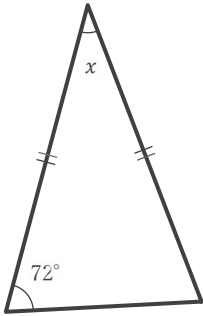
# 二等辺三角形の角の大きさ

\_\_\_\_年 \_\_\_\_組 名前

\_\_\_\_ / 9

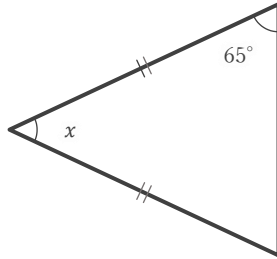
■ 下のそれぞれの二等辺三角形における  $\angle x$  の大きさを求めなさい。

①



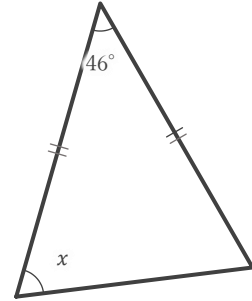
36°

②



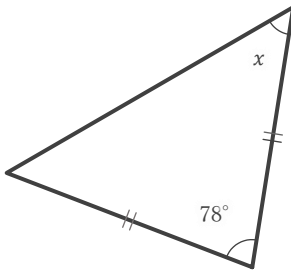
50°

③



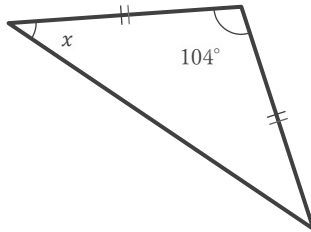
67°

④



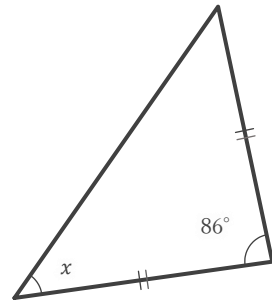
51°

⑤



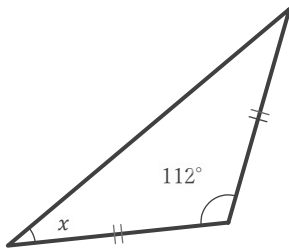
38°

⑥



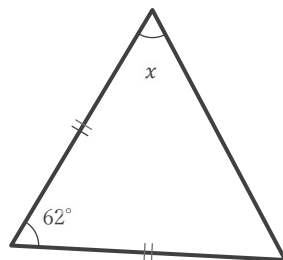
47°

⑦



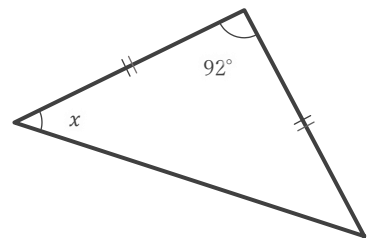
34°

⑧



59°

⑨



44°