

# たしざん(2)

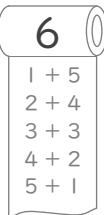
ねん くみ

なまえ

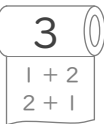
/12

■ まきものを ヒントにして たしざんを しましょう。


①

$$8 + 6 = \square$$



⑤

$$9 + 3 = \square$$


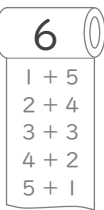
⑨

$$8 + 8 = \square$$


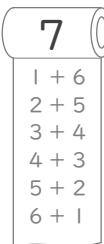
②

$$8 + 4 = \square$$



⑥

$$6 + 6 = \square$$


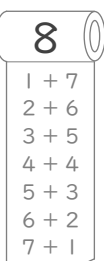
⑩

$$9 + 7 = \square$$


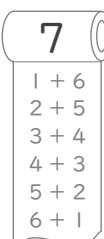
③

$$5 + 9 = \square$$


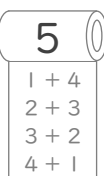
⑦

$$3 + 8 = \square$$


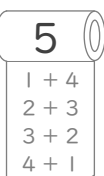
⑪

$$7 + 7 = \square$$


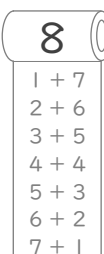
④

$$7 + 5 = \square$$


⑧

$$6 + 5 = \square$$


⑫

$$7 + 8 = \square$$


# たしざん(2)

ねん くみ  
なまえ

/12

■ まきものを ヒントにして たしざんを しましょう。

①  $8 + 6 = 14$

1+5  
2+4  
3+3  
4+2  
5+1

⑤  $9 + 3 = 12$

1+2  
2+1

⑨  $8 + 8 = 16$

1+7  
2+6  
3+5  
4+4  
5+3  
6+2  
7+1

②  $8 + 4 = 12$

1+3  
2+2  
3+1

⑥  $6 + 6 = 12$

1+5  
2+4  
3+3  
4+2  
5+1

⑩  $9 + 7 = 16$

1+6  
2+5  
3+4  
4+3  
5+2  
6+1

③  $5 + 9 = 14$

1+8  
2+7  
3+6  
4+5  
5+4  
6+3  
7+2  
8+1

⑦  $3 + 8 = 11$

1+7  
2+6  
3+5  
4+4  
5+3  
6+2  
7+1

⑪  $7 + 7 = 14$

1+6  
2+5  
3+4  
4+3  
5+2  
6+1

④  $7 + 5 = 12$

1+4  
2+3  
3+2  
4+1

⑧  $6 + 5 = 11$

1+4  
2+3  
3+2  
4+1

⑫  $7 + 8 = 15$

1+7  
2+6  
3+5  
4+4  
5+3  
6+2  
7+1