

たしざん(2)

ねん くみ

なまえ

/12

■ まきものを ヒントにして たしざんを しましょう。

① $7 + 7 = \square$

1+6
2+5
3+4
4+3
5+2
6+1

⑤ $5 + 7 = \square$

1+6
2+5
3+4
4+3
5+2
6+1

⑨ $2 + 9 = \square$

1+8
2+7
3+6
4+5
5+4
6+3
7+2
8+1

② $9 + 6 = \square$

1+5
2+4
3+3
4+2
5+1

⑥ $3 + 9 = \square$

1+8
2+7
3+6
4+5
5+4
6+3
7+2
8+1

⑩ $8 + 8 = \square$

1+7
2+6
3+5
4+4
5+3
6+2
7+1

③ $9 + 8 = \square$

1+7
2+6
3+5
4+4
5+3
6+2
7+1

⑦ $6 + 8 = \square$

1+7
2+6
3+5
4+4
5+3
6+2
7+1

⑪ $4 + 7 = \square$

1+6
2+5
3+4
4+3
5+2
6+1

④ $6 + 7 = \square$

1+6
2+5
3+4
4+3
5+2
6+1

⑧ $9 + 9 = \square$

1+8
2+7
3+6
4+5
5+4
6+3
7+2
8+1

⑫ $9 + 7 = \square$

1+6
2+5
3+4
4+3
5+2
6+1

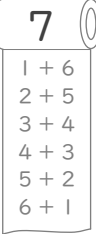
たしざん(2)

ねん くみ
なまえ

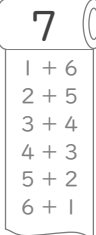
/12

■ まきものを ヒントにして たしざんを しましょう。

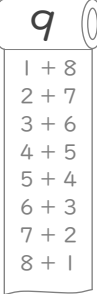
①

$$7 + 7 = 14$$



⑤

$$5 + 7 = 12$$



⑨

$$2 + 9 = 11$$


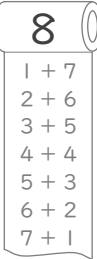
②

$$9 + 6 = 15$$



⑥

$$3 + 9 = 12$$


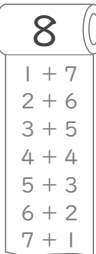
⑩

$$8 + 8 = 16$$


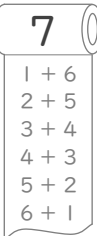
③

$$9 + 8 = 17$$


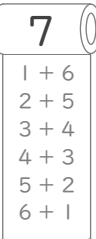
⑦

$$6 + 8 = 14$$


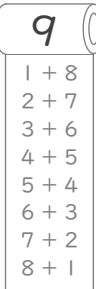
⑪

$$4 + 7 = 11$$


④

$$6 + 7 = 13$$


⑧

$$9 + 9 = 18$$


⑫

$$9 + 7 = 16$$
