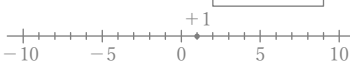



正負の数の減法

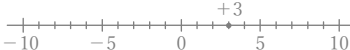
年 組 名前

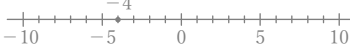
/30

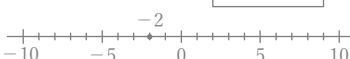
■ 次のひき算をなさい。

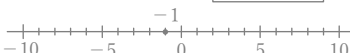
① $(+1) - (-5) = \square$



② $(+2) - (-6) = \square$


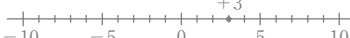
③ $(+3) - (+4) = \square$



④ $(-4) - (+4) = \square$



⑤ $(-2) - (+2) = \square$


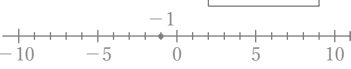
⑥ $(-1) - (+1) = \square$


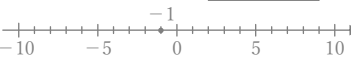
⑦ $(-8) - (-2) = \square$



⑧ $(+3) - (-3) = \square$



⑨ $(-4) - (-8) = \square$


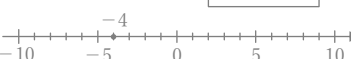
⑩ $(-9) - (-8) = \square$



⑪ $(-1) - (-3) = \square$



⑫ $(-1) - (-1) = \square$


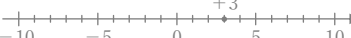
⑬ $(-7) - (+1) = \square$



⑭ $(+5) - (+1) = \square$


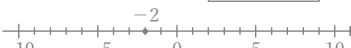
⑮ $(-4) - (+1) = \square$



⑯ $(+9) - (+1) = \square$



⑰ $(+3) - (+6) = \square$



⑱ $(+3) - (+8) = \square$


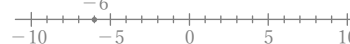
⑲ $(-6) - (-5) = \square$


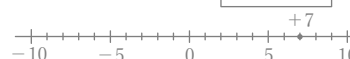
⑳ $(-2) - (-1) = \square$


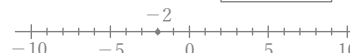
㉑ $(+4) - (-3) = \square$



㉒ $(-5) - (-8) = \square$


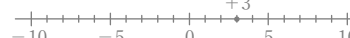
㉓ $(+6) - (+4) = \square$



㉔ $(-6) - (-7) = \square$



㉕ $(+7) - (+7) = \square$


㉖ $(-2) - (+5) = \square$


㉗ $(+2) - (-1) = \square$


㉘ $(+3) - (-6) = \square$


㉙ $(-7) - (+2) = \square$


㉚ $(-3) - (+2) = \square$


正負の数の減法

年 組 名前

/30

■ 次のひき算をしなさい。

