

# 正負の数の減法

年 組 名前

/30

■ 次のひき算をしなさい。

①  $(-5) - (+4) =$



②  $(+6) - (-2) =$



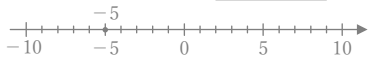
③  $(+2) - (+5) =$



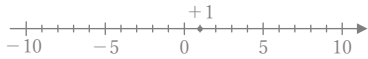
④  $(+7) - (+5) =$



⑤  $(-5) - (-1) =$



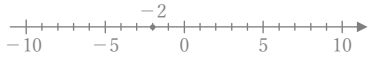
⑥  $(+1) - (-1) =$



⑦  $(+4) - (-4) =$



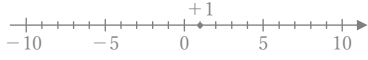
⑧  $(-2) - (+2) =$



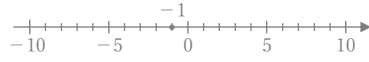
⑨  $(+8) - (+3) =$



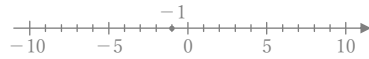
⑩  $(+1) - (-6) =$



⑪  $(-1) - (-3) =$



⑫  $(-1) - (+4) =$



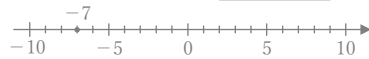
⑬  $(-4) - (-3) =$



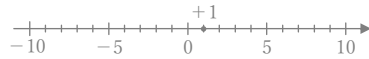
⑭  $(-4) - (+2) =$



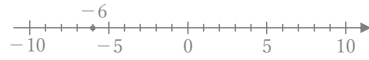
⑮  $(-7) - (-1) =$



⑯  $(+1) - (-5) =$



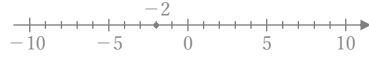
⑰  $(-6) - (-8) =$



⑱  $(-4) - (-5) =$



⑲  $(-2) - (+7) =$



⑳  $(+6) - (-3) =$



㉑  $(+4) - (+8) =$



㉒  $(+3) - (-1) =$



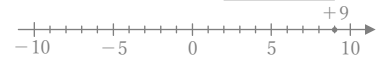
㉓  $(-1) - (+8) =$



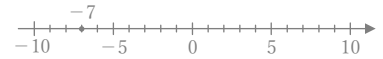
㉔  $(+3) - (+3) =$



㉕  $(+9) - (+3) =$



㉖  $(-7) - (-2) =$



㉗  $(+4) - (-3) =$



㉘  $(-3) - (-7) =$



㉙  $(-5) - (+2) =$



㉚  $(-8) - (-8) =$



# 正負の数の減法

年 組 名前

/30

■ 次のひき算をしなさい。

①  $(-5) - (+4) = \boxed{-9}$

②  $(+6) - (-2) = \boxed{+8}$

③  $(+2) - (+5) = \boxed{-3}$

④  $(+7) - (+5) = \boxed{+2}$

⑤  $(-5) - (-1) = \boxed{-4}$

⑥  $(+1) - (-1) = \boxed{+2}$

⑦  $(+4) - (-4) = \boxed{+8}$

⑧  $(-2) - (+2) = \boxed{-4}$

⑨  $(+8) - (+3) = \boxed{+5}$

⑩  $(+1) - (-6) = \boxed{+7}$

⑪  $(-1) - (-3) = \boxed{+2}$

⑫  $(-1) - (+4) = \boxed{-5}$

⑬  $(-4) - (-3) = \boxed{-1}$

⑭  $(-4) - (+2) = \boxed{-6}$

⑮  $(-7) - (-1) = \boxed{-6}$

⑯  $(+1) - (-5) = \boxed{+6}$

⑰  $(-6) - (-8) = \boxed{+2}$

⑱  $(-4) - (-5) = \boxed{+1}$

⑲  $(-2) - (+7) = \boxed{-9}$

⑳  $(+6) - (-3) = \boxed{+9}$

㉑  $(+4) - (+8) = \boxed{-4}$

㉒  $(+3) - (-1) = \boxed{+4}$

㉓  $(-1) - (+8) = \boxed{-9}$

㉔  $(+3) - (+3) = \boxed{0}$

㉕  $(+9) - (+3) = \boxed{+6}$

㉖  $(-7) - (-2) = \boxed{-5}$

㉗  $(+4) - (-3) = \boxed{+7}$

㉘  $(-3) - (-7) = \boxed{+4}$

㉙  $(-5) - (+2) = \boxed{-7}$

㉚  $(-8) - (-8) = \boxed{0}$