


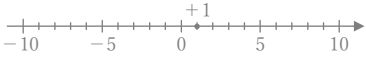
正負の数の減法


年 組 名前

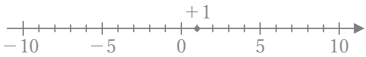
/30

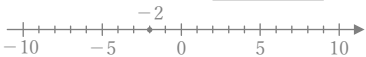
■ 次のひき算をなさい。

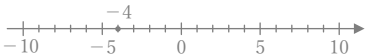
① $(+7) - (+1) =$



② $(+1) - (-5) =$


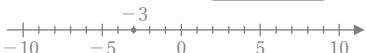
③ $(+4) - (-3) =$



④ $(+1) - (+9) =$


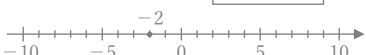
⑤ $(-2) - (-5) =$


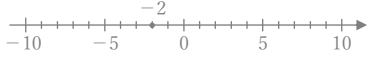
⑥ $(-4) - (-3) =$



⑦ $(+3) - (-2) =$



⑧ $(-3) - (+6) =$



⑨ $(-6) - (+1) =$


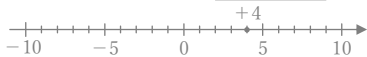
⑩ $(-2) - (+4) =$


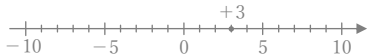
⑪ $(-2) - (-6) =$



⑫ $(+8) - (+7) =$



⑬ $(+3) - (-1) =$



⑭ $(-6) - (+2) =$



⑮ $(+4) - (-5) =$



⑯ $(+3) - (+3) =$



⑰ $(-3) - (-7) =$


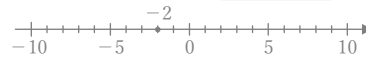
⑱ $(-6) - (-6) =$



⑲ $(-2) - (-4) =$


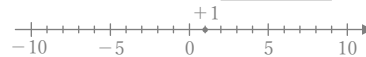
⑳ $(-4) - (+1) =$


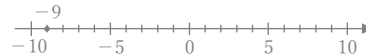
㉑ $(+3) - (+8) =$



㉒ $(+3) - (-5) =$


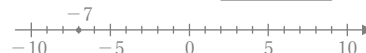
㉓ $(-2) - (+5) =$


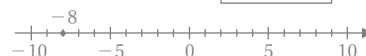
㉔ $(+3) - (+6) =$



㉕ $(+1) - (-7) =$


㉖ $(-9) - (-3) =$


㉗ $(-6) - (-4) =$


㉘ $(-7) - (+2) =$


㉙ $(-8) - (-5) =$


㉚ $(+9) - (+5) =$


正負の数の減法

年 組 名前

/30

■ 次のひき算をなさい。

① $(+7) - (+1) =$ +6

② $(+1) - (-5) =$ +6

③ $(+4) - (-3) =$ +7

④ $(+1) - (+9) =$ -8

⑤ $(-2) - (-5) =$ +3

⑥ $(-4) - (-3) =$ -1

⑦ $(+3) - (-2) =$ +5

⑧ $(-3) - (+6) =$ -9

⑨ $(-6) - (+1) =$ -7

⑩ $(-2) - (+4) =$ -6

⑪ $(-2) - (-6) =$ +4

⑫ $(+8) - (+7) =$ +1

⑬ $(+3) - (-1) =$ +4

⑭ $(-6) - (+2) =$ -8

⑮ $(+4) - (-5) =$ +9

⑯ $(+3) - (+3) =$ 0

⑰ $(-3) - (-7) =$ +4

⑱ $(-6) - (-6) =$ 0

⑲ $(-2) - (-4) =$ +2

⑳ $(-4) - (+1) =$ -5

㉑ $(+3) - (+8) =$ -5

㉒ $(+3) - (-5) =$ +8

㉓ $(-2) - (+5) =$ -7

㉔ $(+3) - (+6) =$ -3

㉕ $(+1) - (-7) =$ +8

㉖ $(-9) - (-3) =$ -6

㉗ $(-6) - (-4) =$ -2

㉘ $(-7) - (+2) =$ -9

㉙ $(-8) - (-5) =$ -3

㉚ $(+9) - (+5) =$ +4