

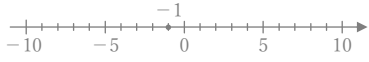
正負の数の減法

年 組 名前

/30

■ 次のひき算をしなさい。

① $(-1) - (+1) =$



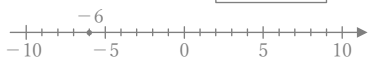
② $(-3) - (-1) =$



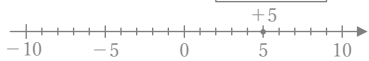
③ $(-4) - (+3) =$



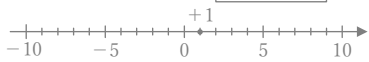
④ $(-6) - (-3) =$



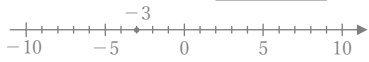
⑤ $(+5) - (+6) =$



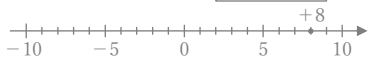
⑥ $(+1) - (+8) =$



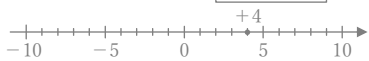
⑦ $(-3) - (-4) =$



⑧ $(+8) - (-1) =$



⑨ $(+4) - (-5) =$



⑩ $(-7) - (-1) =$



⑪ $(+5) - (+1) =$



⑫ $(-5) - (-8) =$



⑬ $(-5) - (+1) =$



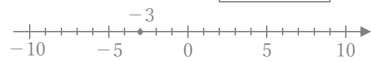
⑭ $(+3) - (-3) =$



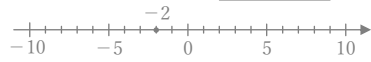
⑮ $(+7) - (-2) =$



⑯ $(-3) - (-9) =$



⑰ $(-2) - (+6) =$



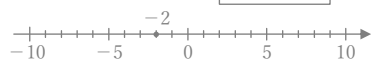
⑱ $(-3) - (-3) =$



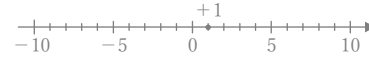
⑲ $(-5) - (-7) =$



⑳ $(-2) - (+2) =$



㉑ $(+1) - (-4) =$



㉒ $(+4) - (-4) =$



㉓ $(+6) - (+6) =$



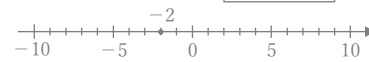
㉔ $(-8) - (-3) =$



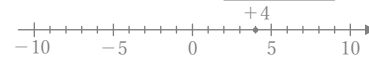
㉕ $(+6) - (-1) =$



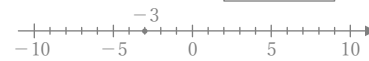
㉖ $(-2) - (+1) =$



㉗ $(+4) - (+5) =$



㉘ $(-3) - (+6) =$



㉙ $(+2) - (-3) =$



㉚ $(+9) - (+1) =$



正負の数の減法

年 組 名前

/30

■ 次のひき算をしなさい。

