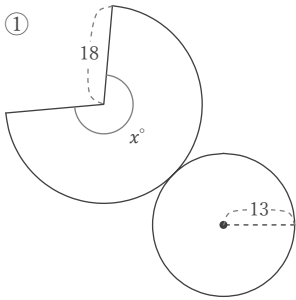


円錐の展開図

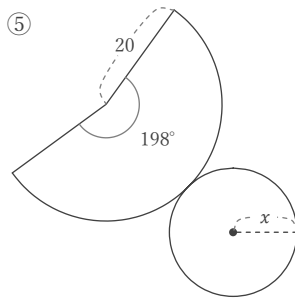
年 組 名前

/12

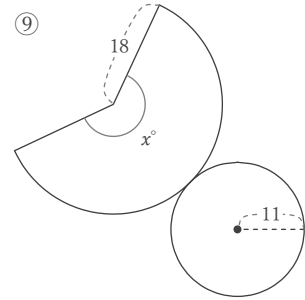
■ 次の図はすべて円錐の展開図である。これについて、 x にあてはまる長さや角度をそれぞれ答えなさい。



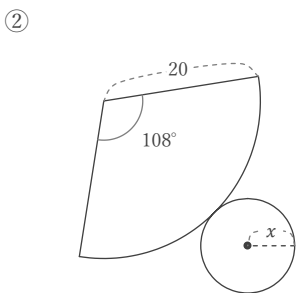
$x =$



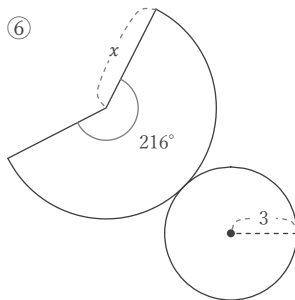
$x =$



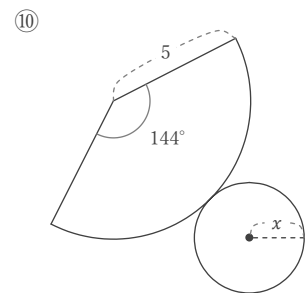
$x =$



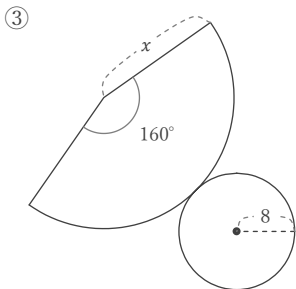
$x =$



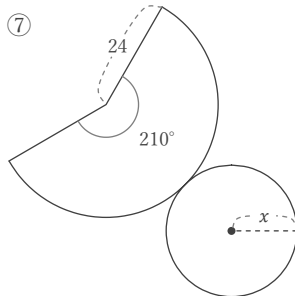
$x =$



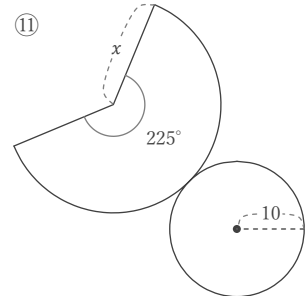
$x =$



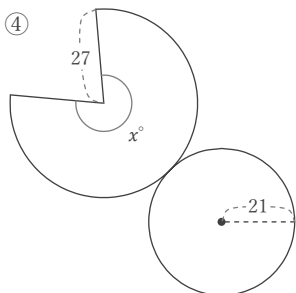
$x =$



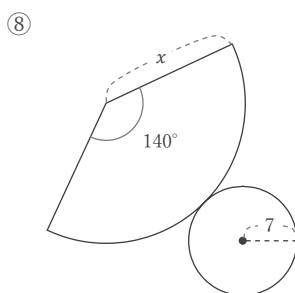
$x =$



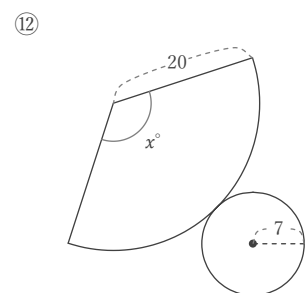
$x =$



$x =$



$x =$



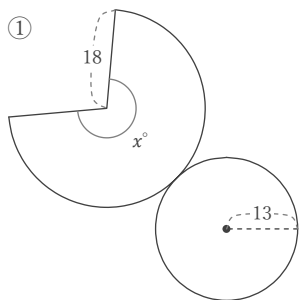
$x =$

円錐の展開図

年 組 名前

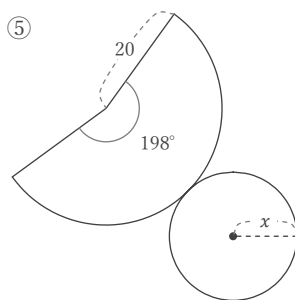
/12

■ 次の図はすべて円錐の展開図である。これについて、 x にあてはまる長さや角度をそれぞれ答えなさい。



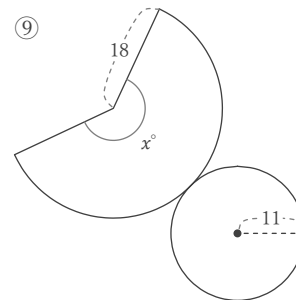
$$x = 360 \times \frac{13}{18}$$

$$x = 260$$



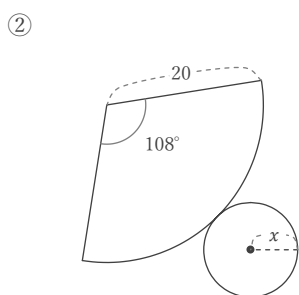
$$x = 20 \times \frac{198}{360}$$

$$x = 11$$



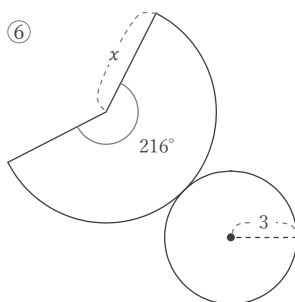
$$x = 360 \times \frac{11}{18}$$

$$x = 220$$



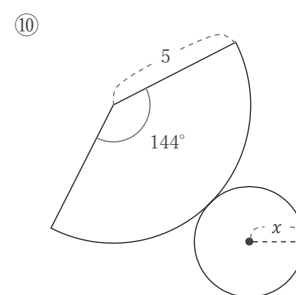
$$x = 20 \times \frac{108}{360}$$

$$x = 6$$



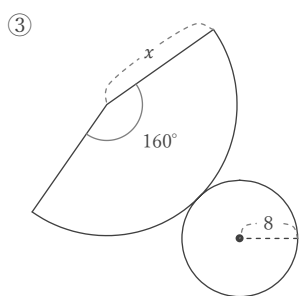
$$x = 3 \times \frac{360}{216}$$

$$x = 5$$



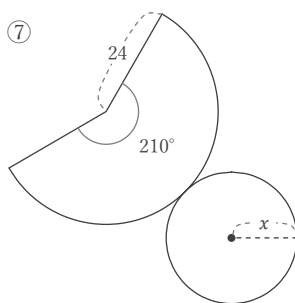
$$x = 5 \times \frac{144}{360}$$

$$x = 2$$



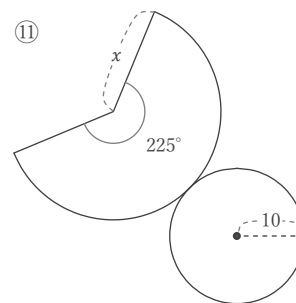
$$x = 8 \times \frac{360}{160}$$

$$x = 18$$



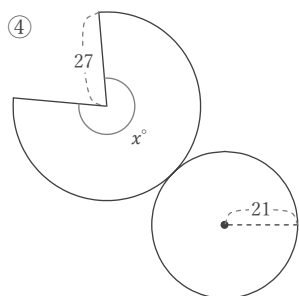
$$x = 24 \times \frac{210}{360}$$

$$x = 14$$



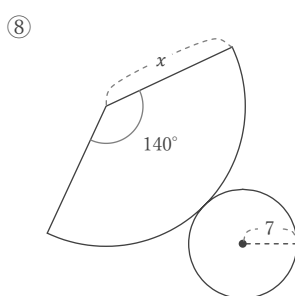
$$x = 10 \times \frac{360}{225}$$

$$x = 16$$



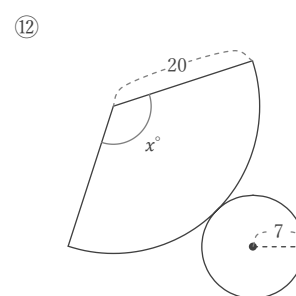
$$x = 360 \times \frac{21}{27}$$

$$x = 280$$



$$x = 7 \times \frac{360}{140}$$

$$x = 18$$



$$x = 360 \times \frac{7}{20}$$

$$x = 126$$