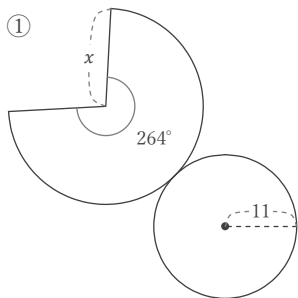


円錐の展開図

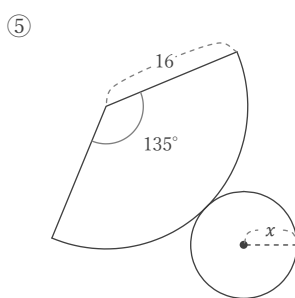
年 組 名前

/12

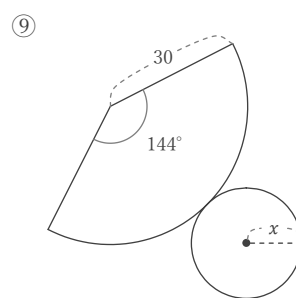
■ 次の図はすべて円錐の展開図である。これについて、 x にあてはまる長さや角度をそれぞれ答えなさい。



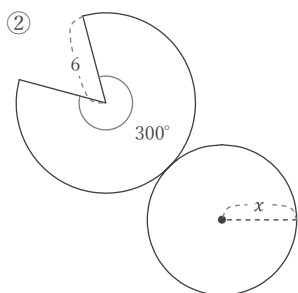
$x =$



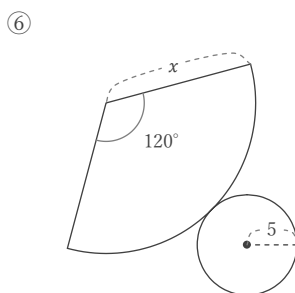
$x =$



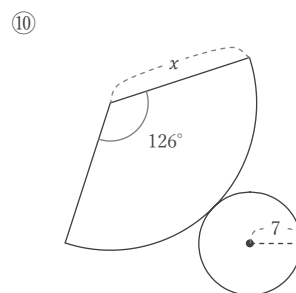
$x =$



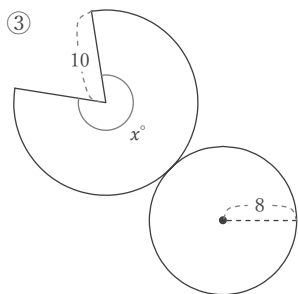
$x =$



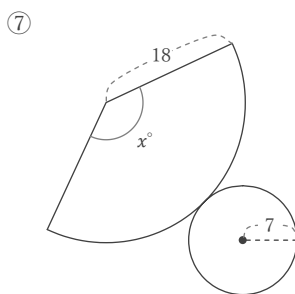
$x =$



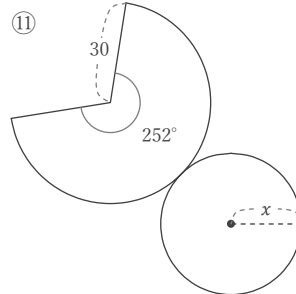
$x =$



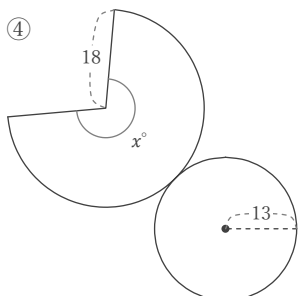
$x =$



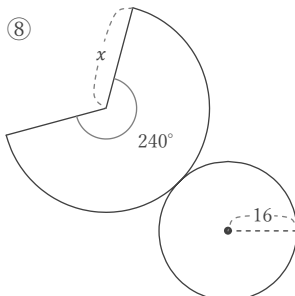
$x =$



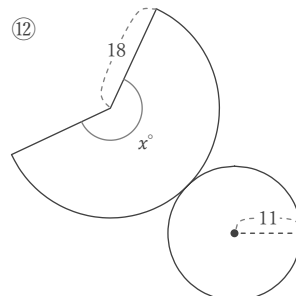
$x =$



$x =$



$x =$



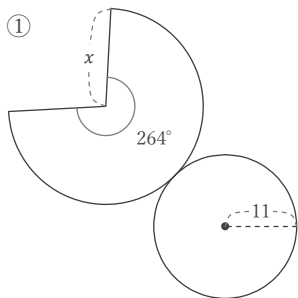
$x =$

円錐の展開図

年 組 名前

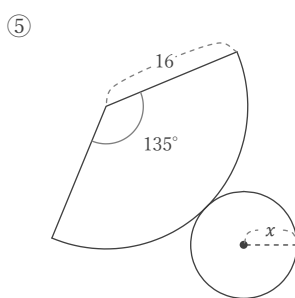
/12

■ 次の図はすべて円錐の展開図である。これについて、 x にあてはまる長さや角度をそれぞれ答えなさい。



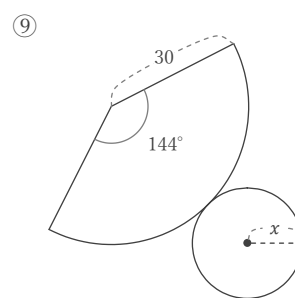
$$x = 11 \times \frac{360}{264}$$

$$x = 15$$



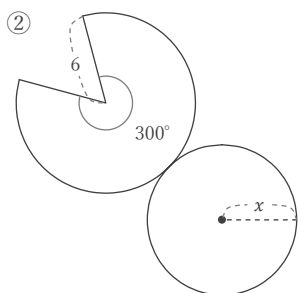
$$x = 16 \times \frac{135}{360}$$

$$x = 6$$



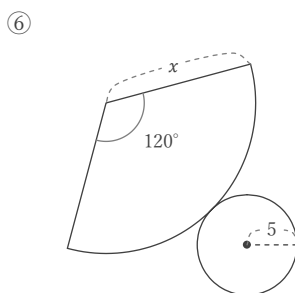
$$x = 30 \times \frac{144}{360}$$

$$x = 12$$



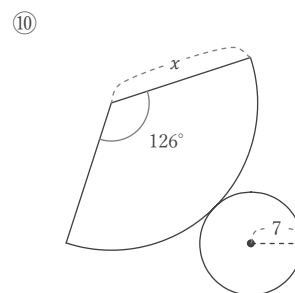
$$x = 6 \times \frac{300}{360}$$

$$x = 5$$



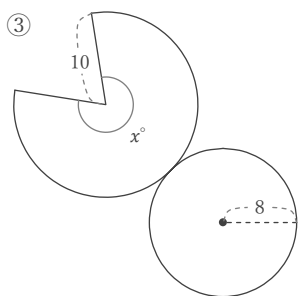
$$x = 5 \times \frac{360}{120}$$

$$x = 15$$



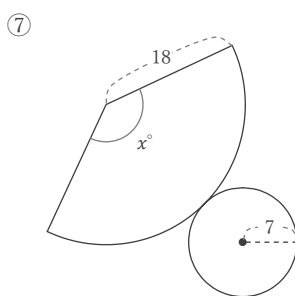
$$x = 7 \times \frac{360}{126}$$

$$x = 20$$



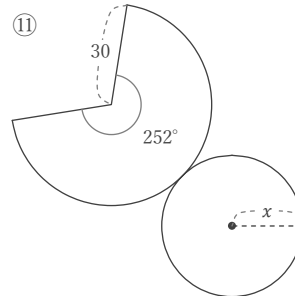
$$x = 360 \times \frac{8}{10}$$

$$x = 288$$



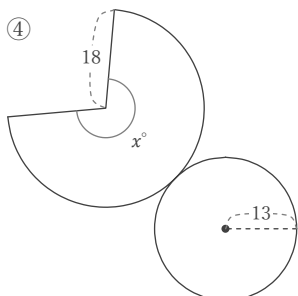
$$x = 360 \times \frac{7}{18}$$

$$x = 140$$



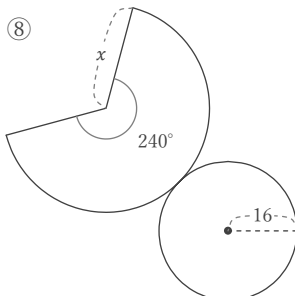
$$x = 30 \times \frac{252}{360}$$

$$x = 21$$



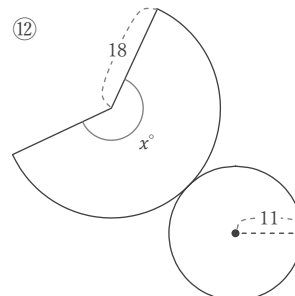
$$x = 360 \times \frac{13}{18}$$

$$x = 260$$



$$x = 16 \times \frac{360}{240}$$

$$x = 24$$



$$x = 360 \times \frac{11}{18}$$

$$x = 220$$