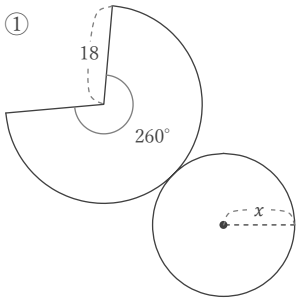


円錐の展開図

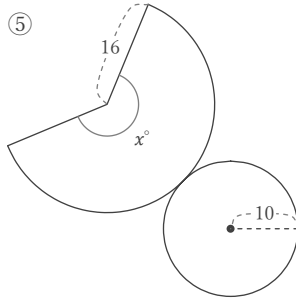
年 組 名前

/12

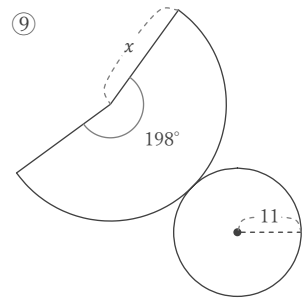
■ 次の図はすべて円錐の展開図である。これについて、 x にあてはまる長さや角度をそれぞれ答えなさい。



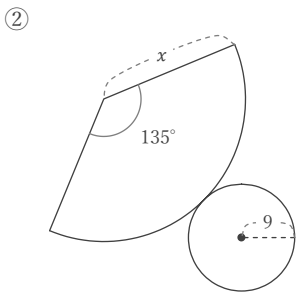
$x =$



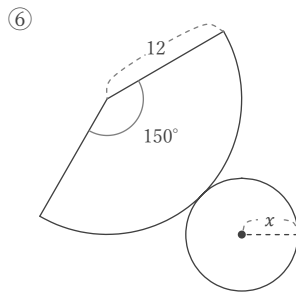
$x =$



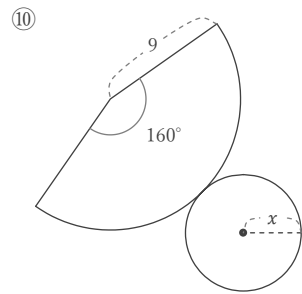
$x =$



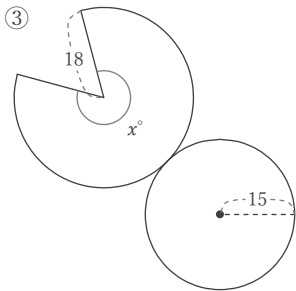
$x =$



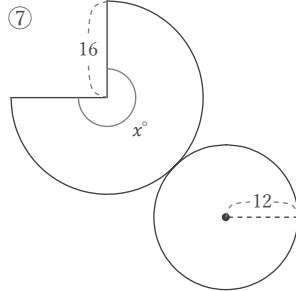
$x =$



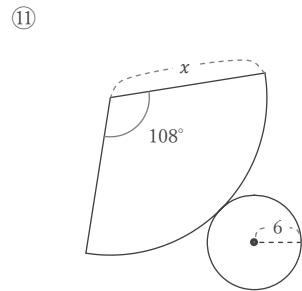
$x =$



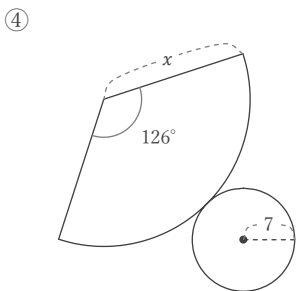
$x =$



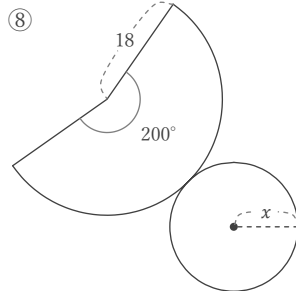
$x =$



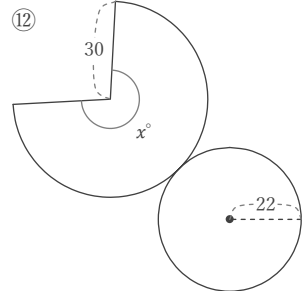
$x =$



$x =$



$x =$



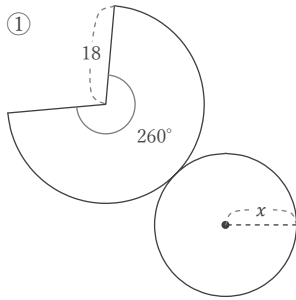
$x =$

円錐の展開図

年 組 名前

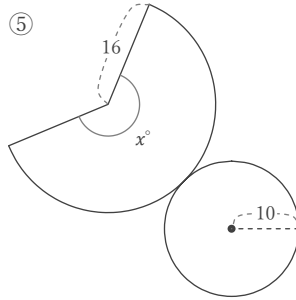
/12

■ 次の図はすべて円錐の展開図である。これについて、 x にあてはまる長さや角度をそれぞれ答えなさい。



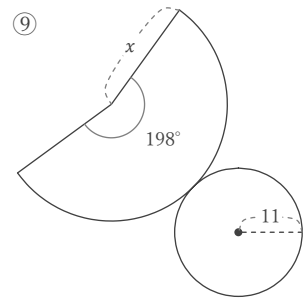
$$x = 18 \times \frac{360}{260}$$

$$x = 13$$



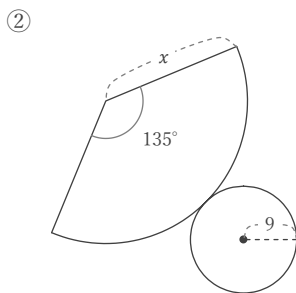
$$x = 360 \times \frac{10}{16}$$

$$x = 225$$



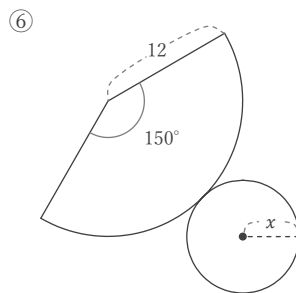
$$x = 11 \times \frac{360}{198}$$

$$x = 20$$



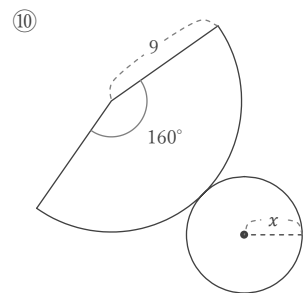
$$x = 9 \times \frac{360}{135}$$

$$x = 24$$



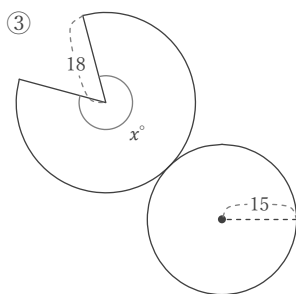
$$x = 12 \times \frac{150}{360}$$

$$x = 5$$



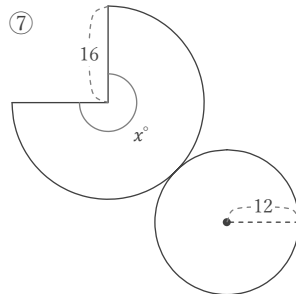
$$x = 9 \times \frac{160}{360}$$

$$x = 4$$



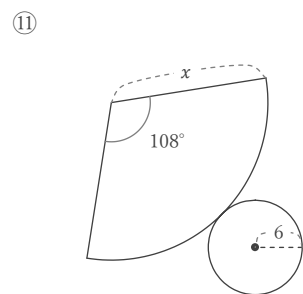
$$x = 360 \times \frac{15}{18}$$

$$x = 300$$



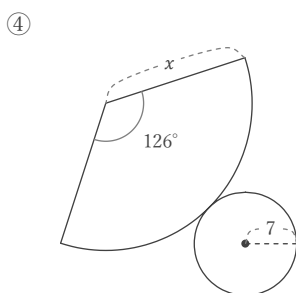
$$x = 360 \times \frac{12}{16}$$

$$x = 270$$



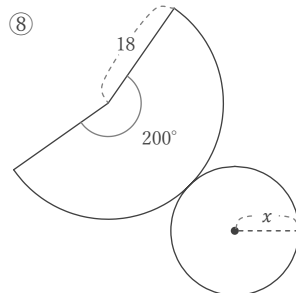
$$x = 6 \times \frac{360}{108}$$

$$x = 20$$



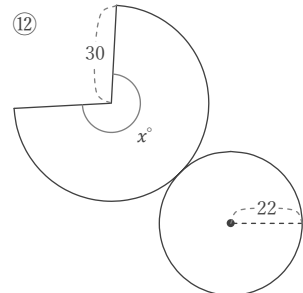
$$x = 7 \times \frac{360}{126}$$

$$x = 20$$



$$x = 18 \times \frac{200}{360}$$

$$x = 10$$



$$x = 360 \times \frac{22}{30}$$

$$x = 264$$