

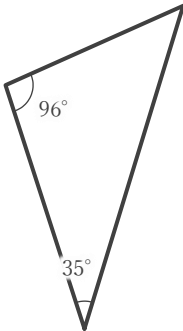
鋭角・直角・鈍角

年 組 名前

/ 9

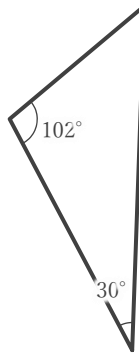
■ 下の三角形が、それぞれ「鋭角三角形」「直角三角形」「鈍角三角形」のいずれかを答えましょう。

①



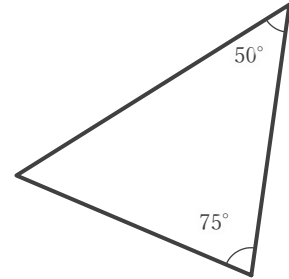
角三角形

②



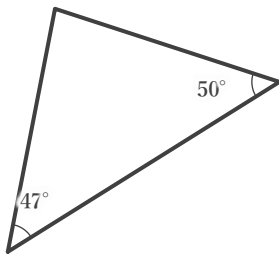
角三角形

③



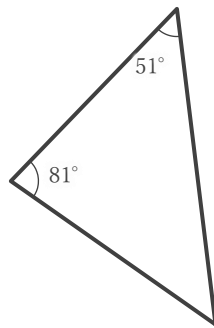
角三角形

④



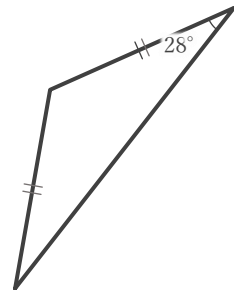
角三角形

⑤



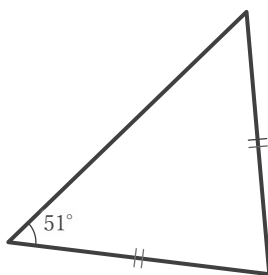
角三角形

⑥



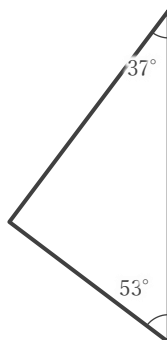
角三角形

⑦



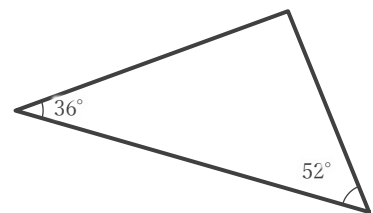
角三角形

⑧



角三角形

⑨



角三角形

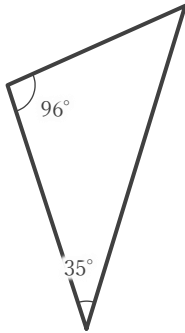
鋭角・直角・鈍角

年 組 名前

/ 9

■ 下の三角形が、それぞれ「鋭角三角形」「直角三角形」「鈍角三角形」のいずれかを答えましょう。

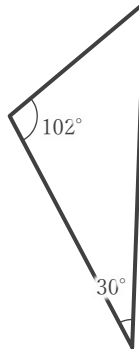
①



鈍

角三角形

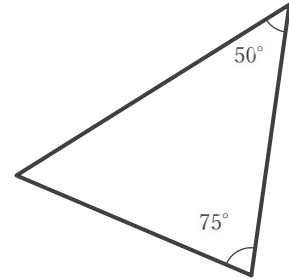
②



鈍

角三角形

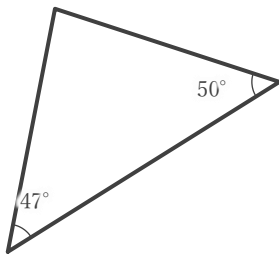
③



鋭

角三角形

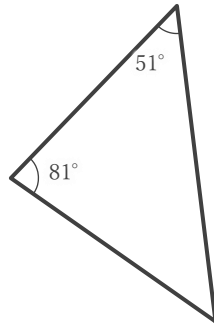
④



鋭

角三角形

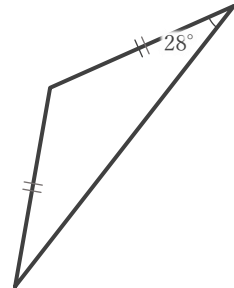
⑤



鋭

角三角形

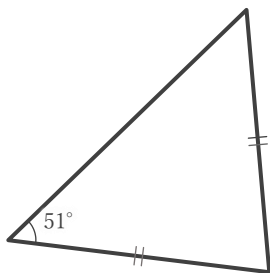
⑥



鈍

角三角形

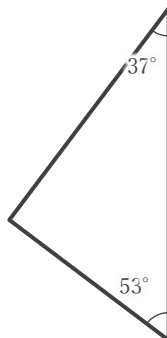
⑦



鋭

角三角形

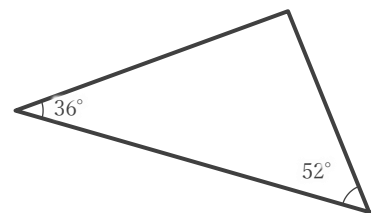
⑧



直

角三角形

⑨



鈍

角三角形