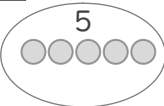


■ たし算をしましょう。

① $39 + 5 = \square$

30 +

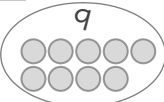
31	32	33	34	35
36	37	38	39	40



② $79 + 9 = \square$

70 +

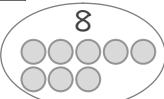
71	72	73	74	75
76	77	78	79	80



③ $68 + 8 = \square$

60 +

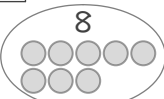
61	62	63	64	65
66	67	68	69	70



④ $25 + 8 = \square$

20 +

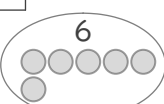
21	22	23	24	25
26	27	28	29	30



⑤ $59 + 6 = \square$

50 +

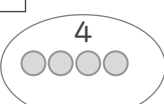
51	52	53	54	55
56	57	58	59	60



⑥ $48 + 4 = \square$

40 +

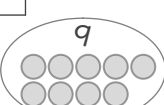
41	42	43	44	45
46	47	48	49	50



⑦ $14 + 9 = \square$

10 +

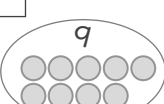
11	12	13	14	15
16	17	18	19	20



⑧ $87 + 9 = \square$

80 +

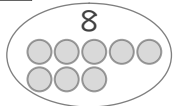
81	82	83	84	85
86	87	88	89	90



⑨ $66 + 8 = \square$

60 +

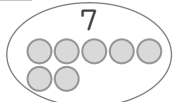
61	62	63	64	65
66	67	68	69	70



⑩ $46 + 7 = \square$

40 +

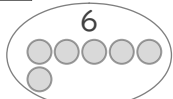
41	42	43	44	45
46	47	48	49	50



⑪ $26 + 6 = \square$

20 +

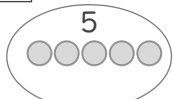
21	22	23	24	25
26	27	28	29	30



⑫ $57 + 5 = \square$

50 +

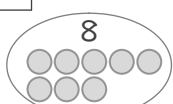
51	52	53	54	55
56	57	58	59	60



⑬ $17 + 8 = \square$

10 +

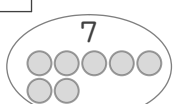
11	12	13	14	15
16	17	18	19	20



⑭ $74 + 7 = \square$

70 +

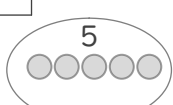
71	72	73	74	75
76	77	78	79	80



⑮ $86 + 5 = \square$

80 +

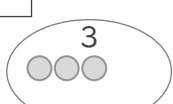
81	82	83	84	85
86	87	88	89	90



⑯ $39 + 3 = \square$

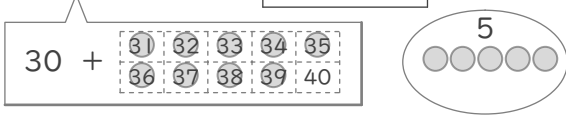
30 +

31	32	33	34	35
36	37	38	39	40

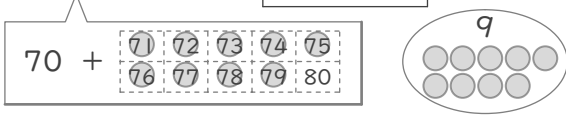


■ たし算をしましょう。

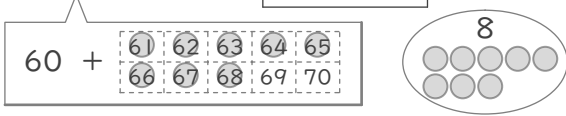
① $39 + 5 = 44$



② $79 + 9 = 88$



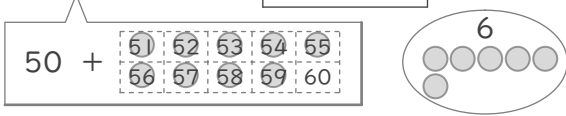
③ $68 + 8 = 76$



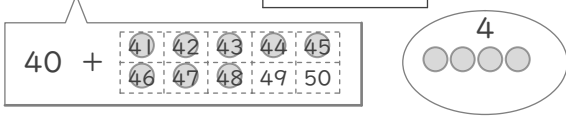
④ $25 + 8 = 33$



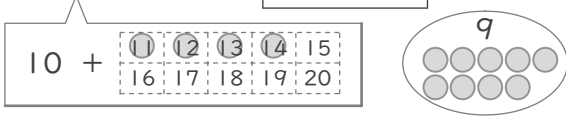
⑤ $59 + 6 = 65$



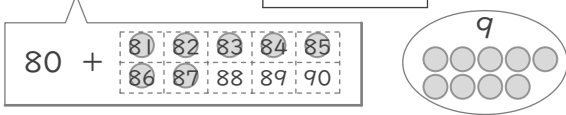
⑥ $48 + 4 = 52$



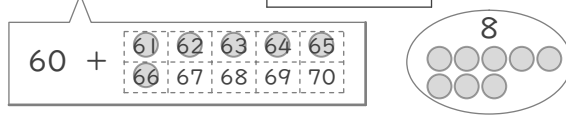
⑦ $14 + 9 = 23$



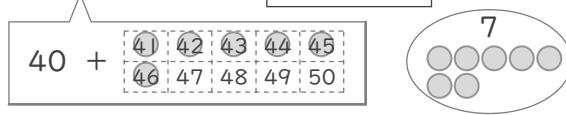
⑧ $87 + 9 = 96$



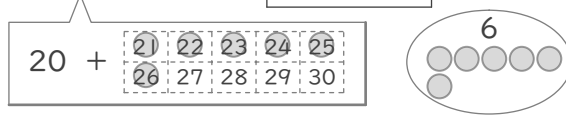
⑨ $66 + 8 = 74$



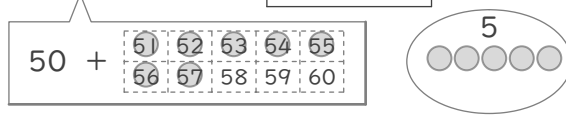
⑩ $46 + 7 = 53$



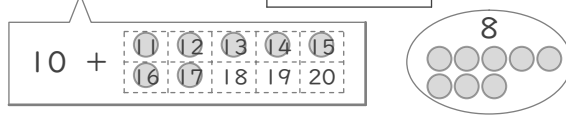
⑪ $26 + 6 = 32$



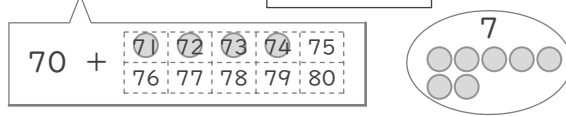
⑫ $57 + 5 = 62$



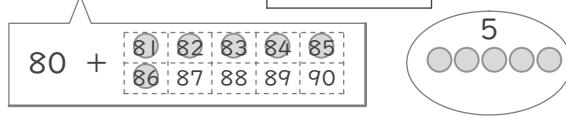
⑬ $17 + 8 = 25$



⑭ $74 + 7 = 81$



⑮ $86 + 5 = 91$



⑯ $39 + 3 = 42$

